





20th April

$$-24 + 31$$



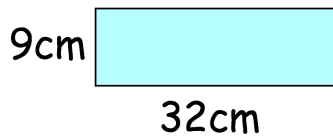
9 | 7 1 8 2



Write the number 700 in Roman numerals



Phoebe has some rectangles.
They each measure 32cm by 9cm.



She makes this design with six of the rectangles.

Work out the lengths x and y

