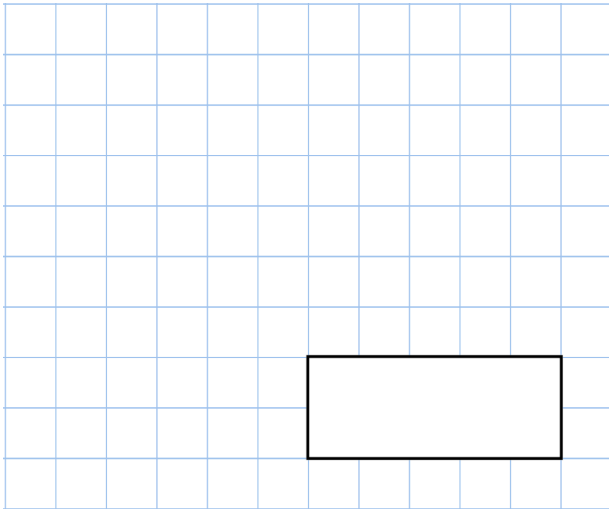


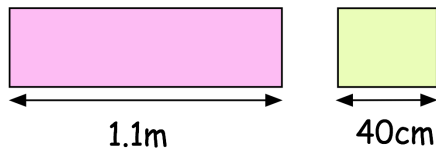
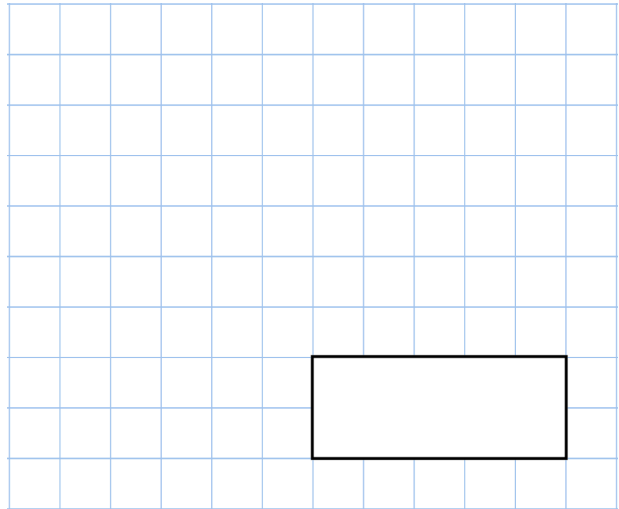


8th April

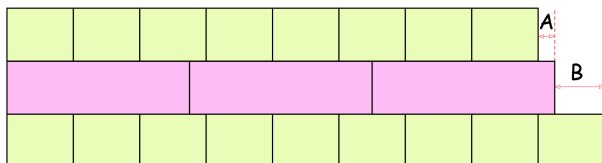
10% of 700



$$\frac{9}{10} - \frac{2}{5}$$



Toby makes a pattern with the rectangles above



Calculate the length of A

Calculate the length of B

Chloe has completed her homework.

What has Chloe done wrong?

(a) $\frac{3}{4} = \frac{4}{16}$

(b) $\frac{3}{5} = \frac{6}{15}$