



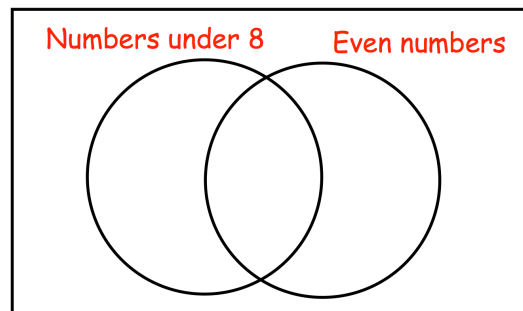
5th August

Simplify $\frac{16}{24}$

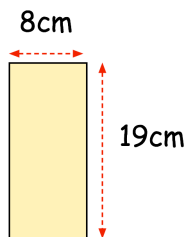
$305 \times 1,000$

Put these numbers in the correct place on the diagram


4 5 8 9 10



A shape is made from two rectangular tiles like this



This is the shape



Work out the area of the shape

Work out the perimeter of the shape