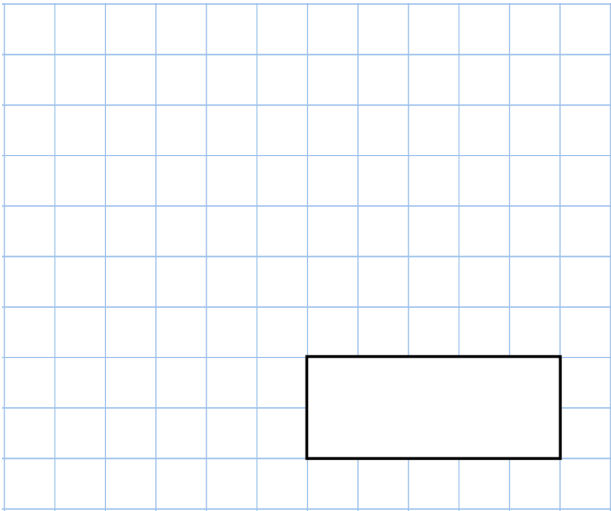


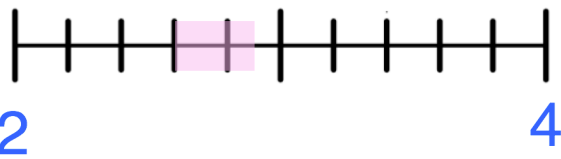
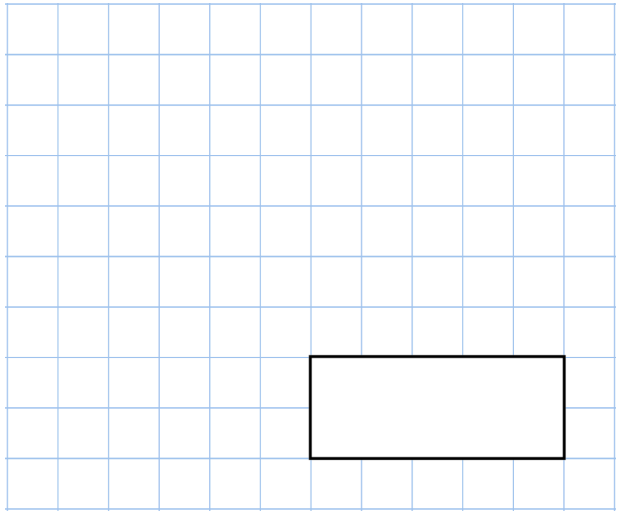


1st December

14^2



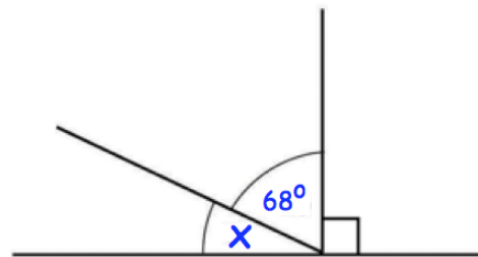
$\frac{42}{9} = 4 \frac{\square}{9}$



Circle all the numbers below that belong in the shaded part of the number line.

$2\frac{1}{2} \quad 2\frac{4}{5} \quad 2\frac{1}{4} \quad 2\frac{2}{3}$

Work out the size of angle x



Mike scored 31 out of 50 in a test.

The pass mark is 60%

Did Mike pass the test?

