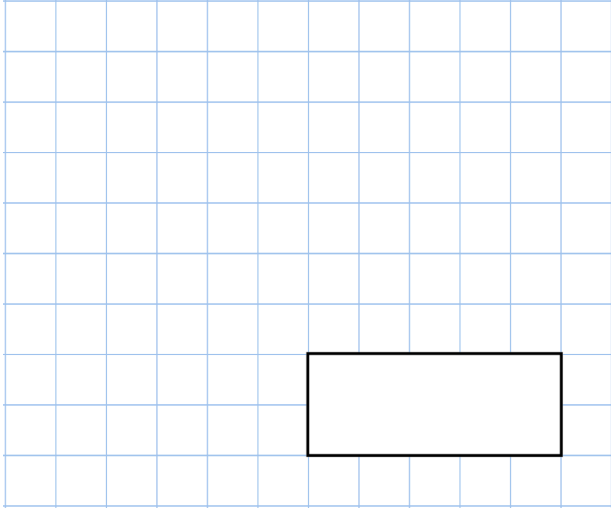




7th December

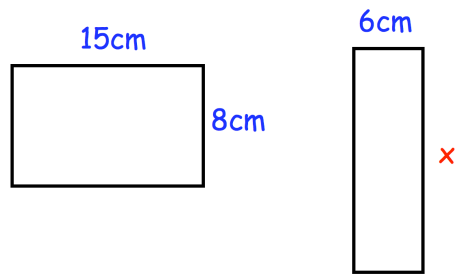
$4^3$



$\frac{7}{13} = \frac{63}{\square}$

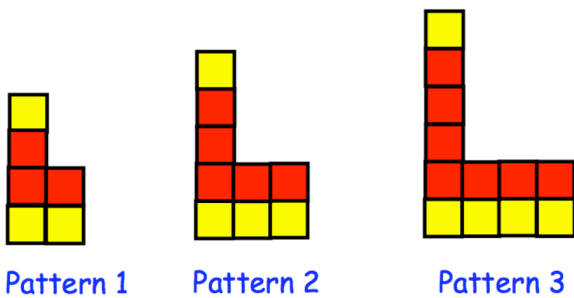


These two rectangles have the same area.  
Find the length of the second rectangle.



Olivia chooses a whole number  
She multiples it by 3 and then adds 1  
She then divides this result by 2.  
Her answer is 27.5

What was the number she started with?



How many square are in in Pattern 4?