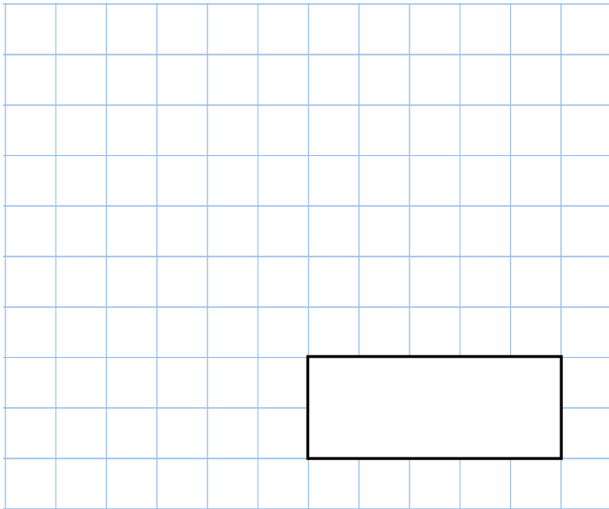


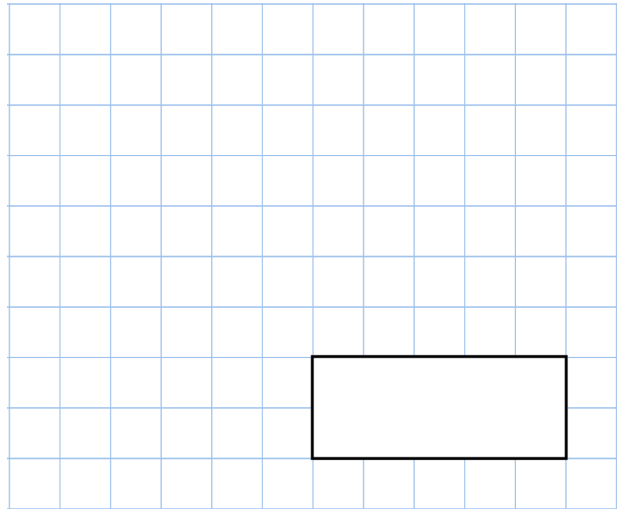


20th February

$$1,302 \times 1,000$$



$$\frac{10}{7} = 1 \frac{\square\square}{7}$$



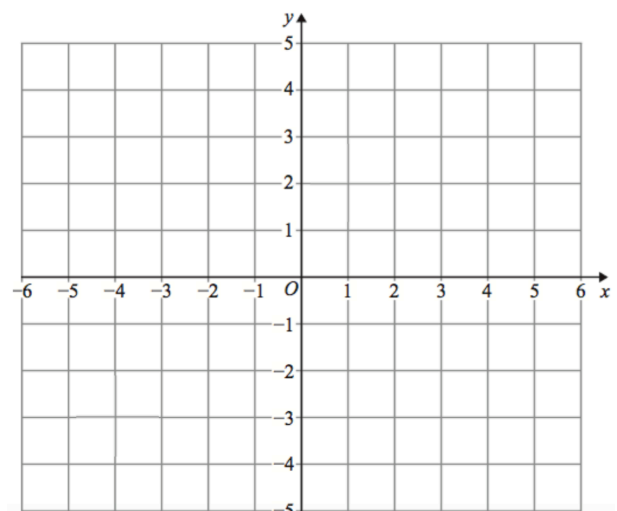
Mr Jenkins is tiling a square floor.
He uses 121 square tiles.

Work out how many tiles are in each row.

Ciara is drawing a parallelogram on the grid.
She plots three points.

$$(-4, -3) \quad (-3, -1) \quad (2, -1)$$

Plot these points



Emily has one more point to plot.

Write down the coordinates of the fourth vertex of the parallelogram