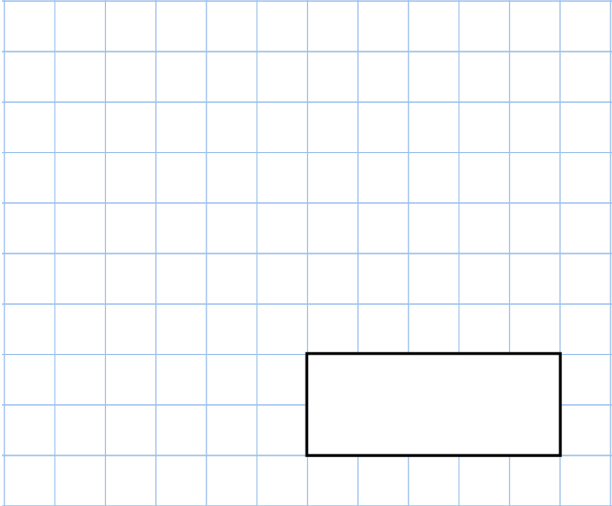
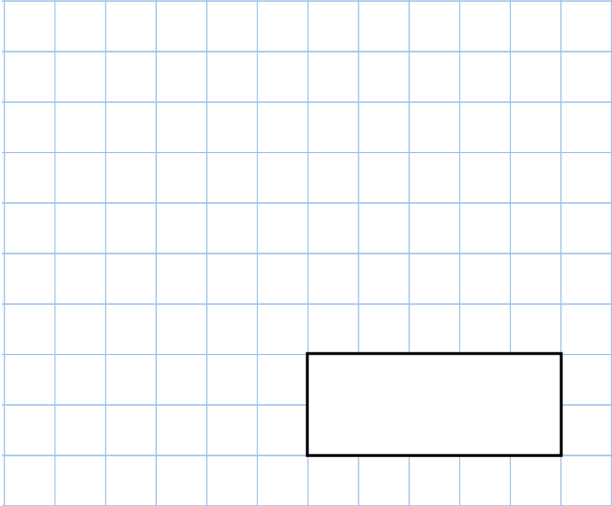
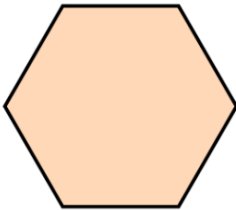


Name: \_\_\_\_\_



<b>8th January</b>	
$\frac{5}{9}$ of 5418     <div style="border: 1px solid black; width: 150px; height: 30px; margin: 0 auto;"></div>	<i>Simplify</i> $\frac{4}{6}$     <div style="border: 1px solid black; width: 150px; height: 30px; margin: 0 auto;"></div>
<p>Timothy saves £34 a week</p> <p>Calculate how much money Timothy will save in one year</p>	
<p>Find the perimeter of this regular hexagon</p>	<p>7cm</p> 
<p>The attendance at Frome United versus Trowbridge Rovers was 8,701</p> <p>Five-sevenths of the crowd were male</p> <p>Work out how many people were female</p>	