
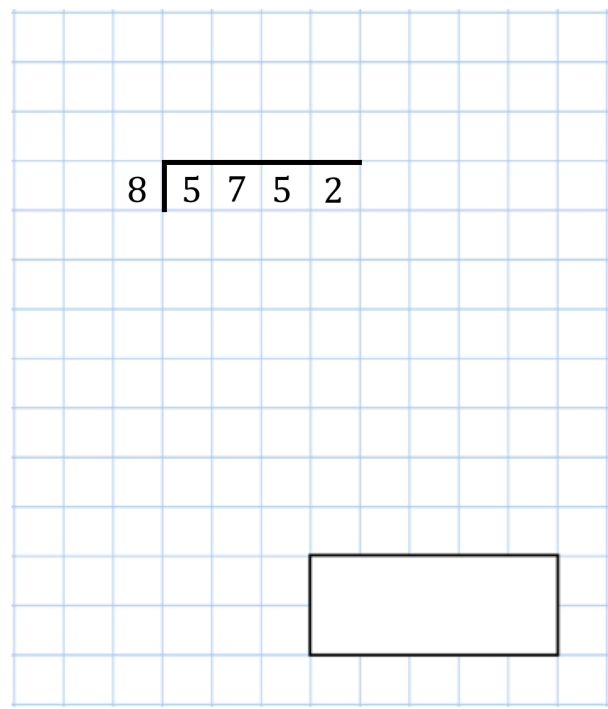





8th July

$$0.405 \times 10$$



A farmer has a field that is 200 metres long and 60 metres.

Work out the area of the field



Work out the perimeter of the field

A bottle of cola holds 3 litres.

How many 120 millilitre glasses can be poured from the bottle?

