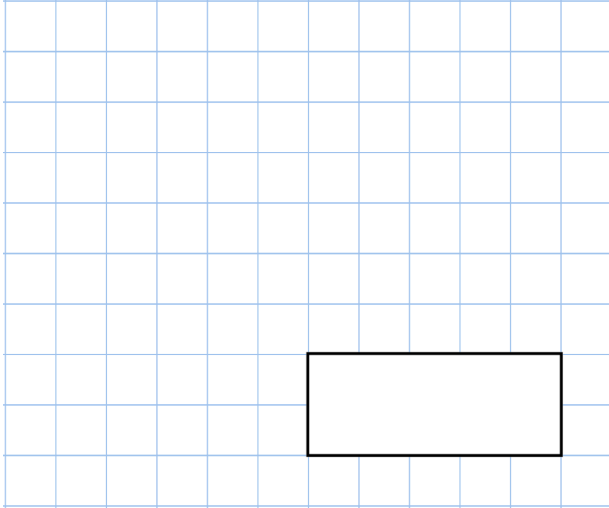


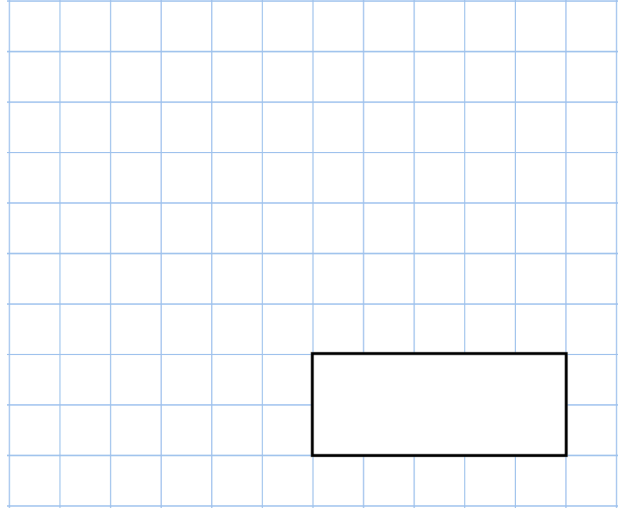


8th June

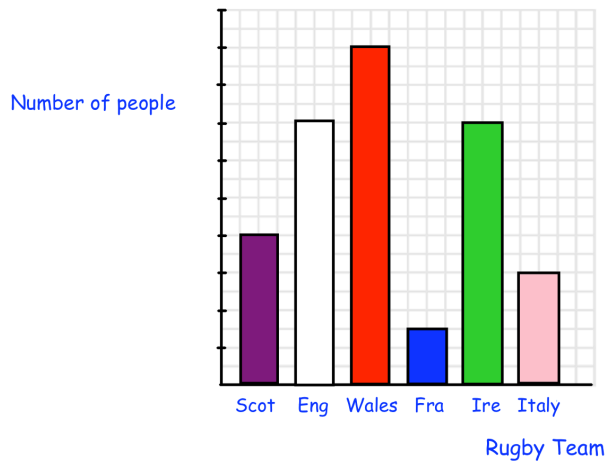
25% of 308



$$\frac{1}{4} + \frac{7}{12}$$



Jonathan asked his friends which country they support in rugby. He has shown the results in a bar chart.



Jonathan has drawn the bar chart accurately, but he has forgotten to label the number of people.

Find the missing numbers

Rugby Team	Number of people
Scotland	
England	
Wales	
France	9
Ireland	
Italy	

Frank thinks of a **whole** number.
 He multiplies it by 6.
 He rounds his answer to the nearest 10

 The answer is 70

Write all the possible numbers that Frank could have started with