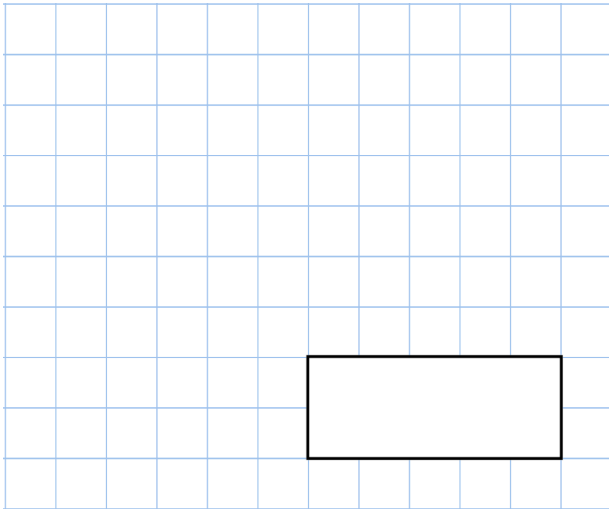


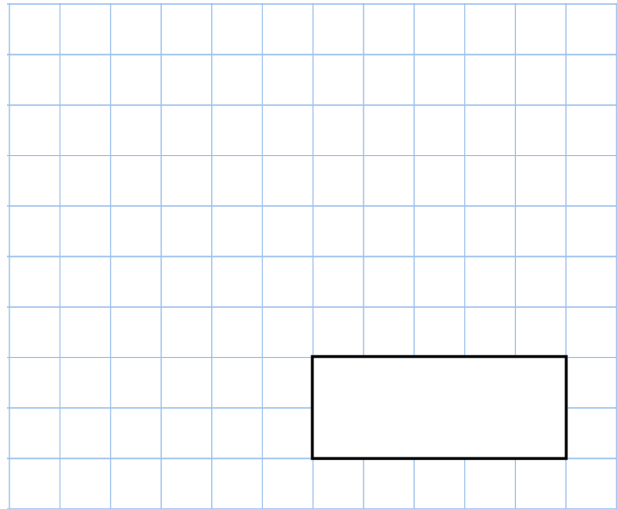


19th March


$$10 - 1.11$$



$$4^3$$



6cm



2cm

Four rectangles identical to the one above are put together to make a large shape.

Work out the perimeter of the larger shape



Write these numbers in order of size
Start with the smallest number.

60% $\frac{1}{2}$ 0.3 $\frac{3}{4}$ 0.4

Each member of a club is going to receive a badge.

There are 140 members.

The badges are sold in packs of 9.

Work out the least number of packs of badges that need to be bought.