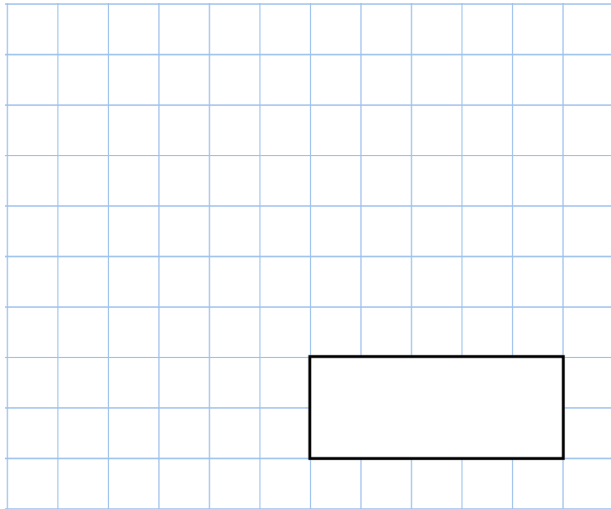


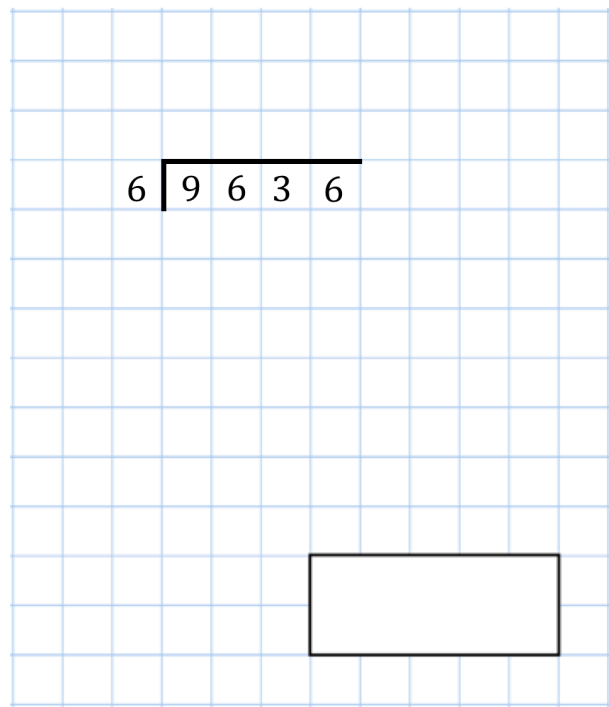


12th May

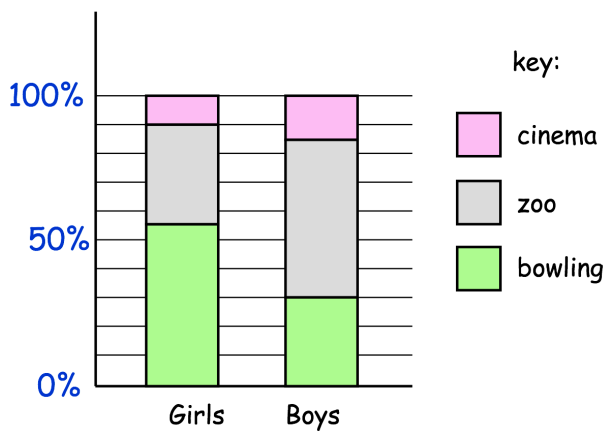
$$0.008 + 0.55 + 0.093$$



$$\begin{array}{r} 6 \overline{) 9636} \end{array}$$



A teacher asks some girls and boys what they wanted to do on a school trip



What percentage of girls wanted to go to the zoo?

12 boys wanted to go bowling.

Estimate how many boys wanted to go to the cinema.

Four friends are in a race.

Alice is 5 metres ahead of Barry

Clara is 10 metres behind Dylan

Barry is 3 metres behind Dylan

Write the names of the runners in order, starting with the friend who is furthest ahead