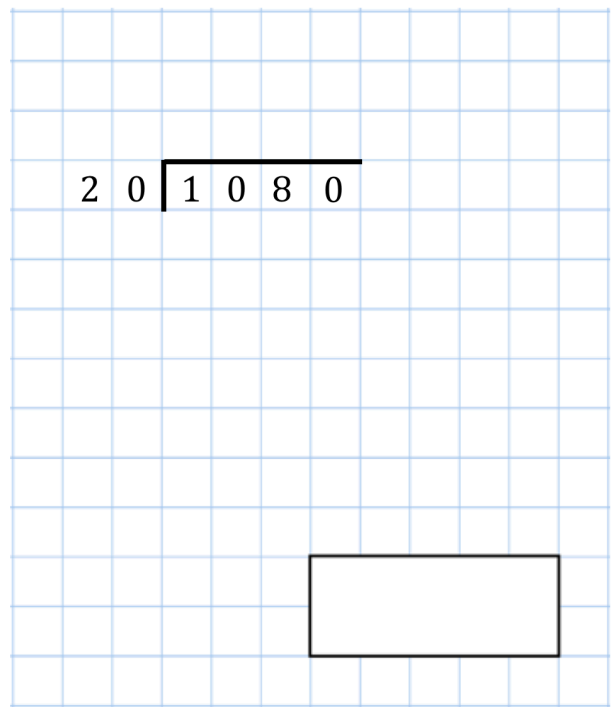
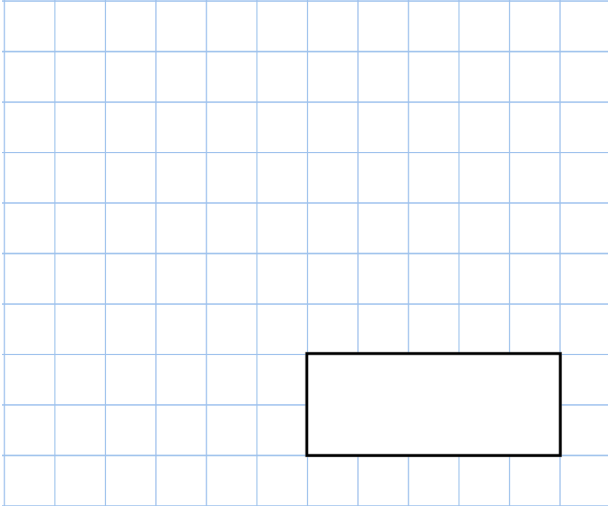





27th October

$$\frac{2}{11} = \frac{28}{\square}$$



What is the perimeter of this rectangle?



Two of the fractions are equivalent

Circle the equivalent fractions.

$$\frac{2}{3} \quad \frac{12}{15} \quad \frac{9}{12} \quad \frac{16}{20} \quad \frac{6}{10}$$

Michael and Rosie each have a bottle of water.

Michael's bottle contains $1\frac{3}{4}$ litres

Rosie's bottle contains 2.2 litres.

How many more **millilitres** of water does Rosie have than Michael?