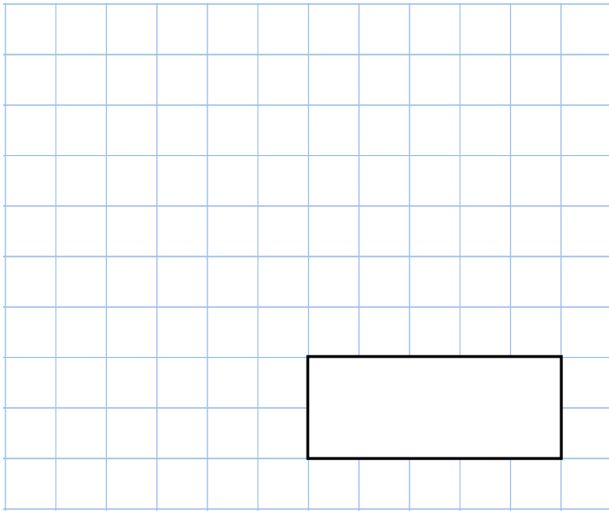
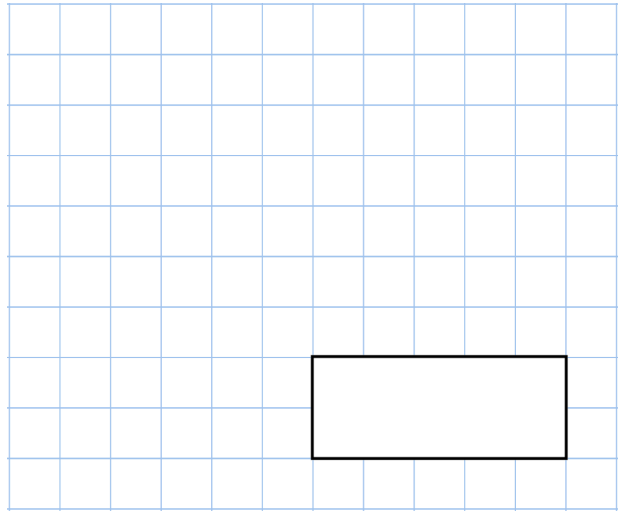


**10th September**

50% of 130

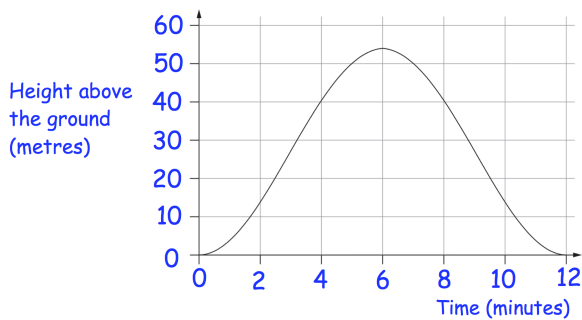


$$\frac{3}{20} + \frac{3}{4}$$



Jessica goes on a big wheel at a funfair.

The graph shows her height above the ground as the wheel turns



How long from the start does it take for Jessica to reach a height of 50 metres?

What was the greatest height Jessica reached?

Jodie has a bag of 3 red and 5 green marbles.

Jodie adds five red and five green marbles to the bag.

What fraction of the marbles in the bag are now red?