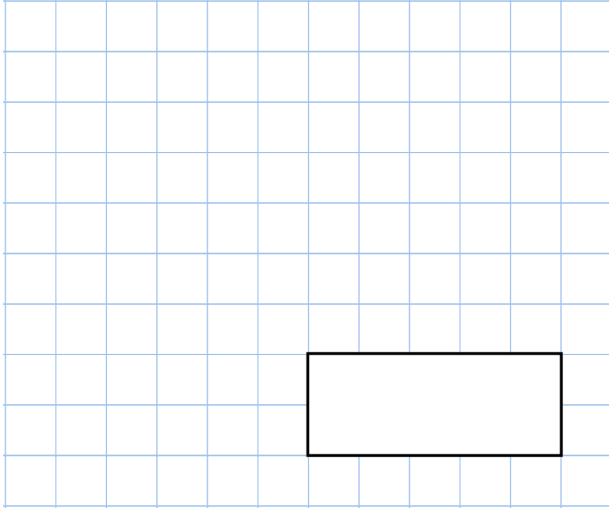


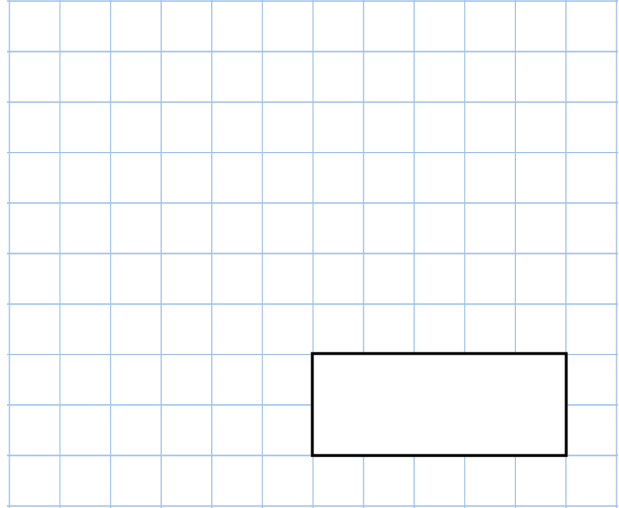


6th September

$$50\% = \frac{\begin{array}{|c|} \hline \square \\ \hline \square \\ \hline \end{array}}{\begin{array}{|c|} \hline \square \\ \hline \square \\ \hline \end{array}}$$



$$5.405 - 1.98$$

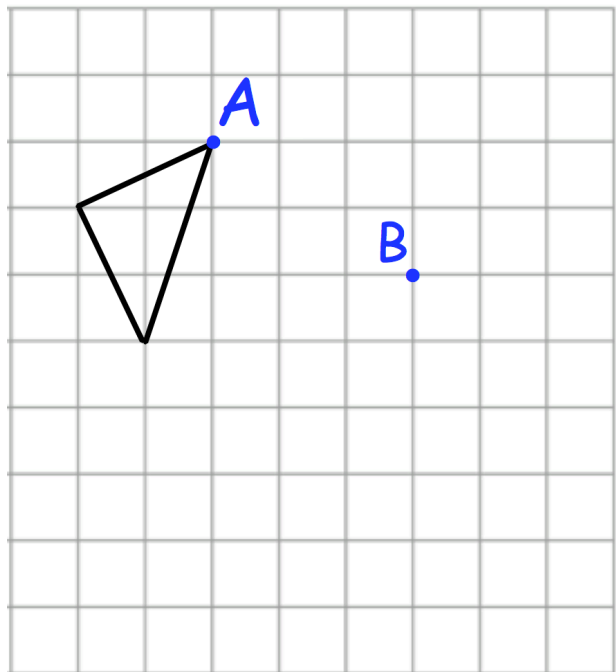


The perimeter of this rectangle is 3 metres  
Calculate the width of the rectangle

1.2 metres



Here is a triangle on a square grid.  
The triangle is translated so that point A moves to point B.  
Draw the triangle in the new position.



Draw a parallelogram on the grid