

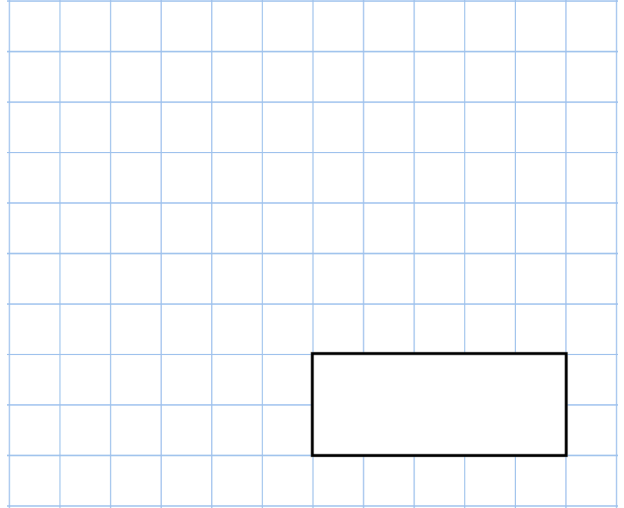


22nd April

$$16.42 \times 9$$



$$1\frac{1}{2} \times 13$$



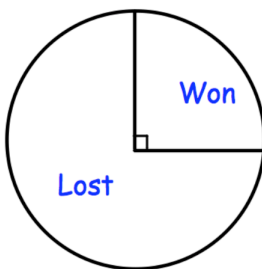
A shop charges 12p to photocopy one page in full colour.

Sam has photocopied some pages in colour and the total cost is £16.08

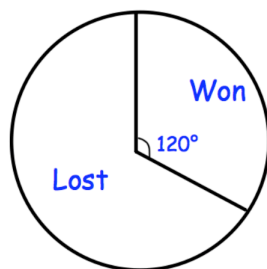
How many pages did he photocopy?



Under 13's



Under 15's



The Under 13's played 28 matches.
The Under 15's played 18 matches.

Which team won more matches?

What 3D shape is this the net for?

