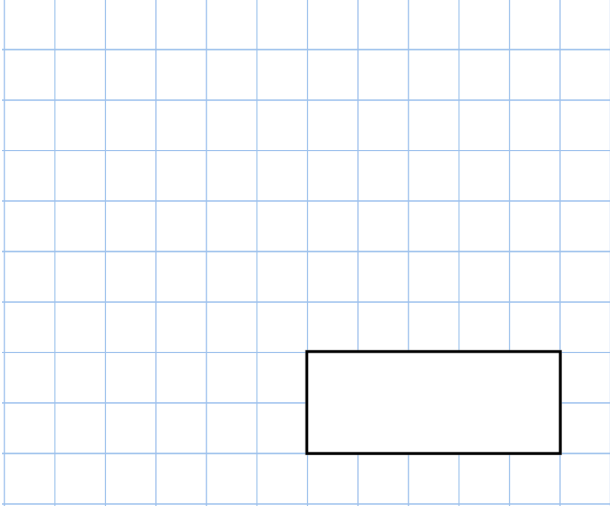


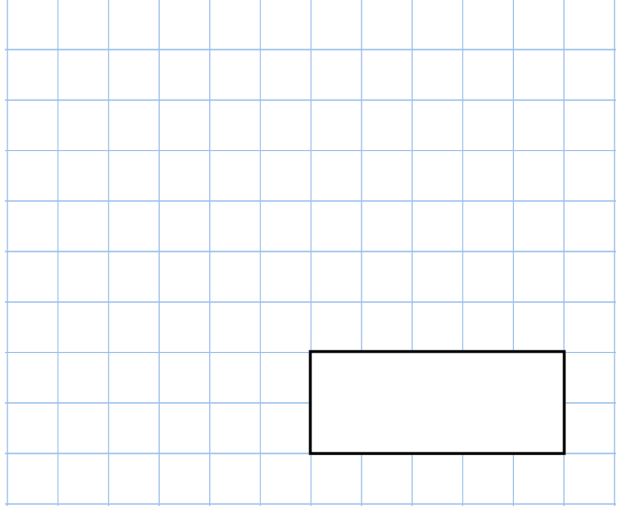


24th April

$374 \div 22$




$0.8 \times 300$



Barry is paid £18,000 each year.  
 Next year he will be paid 15% more.  
 How much will Barry be paid next year?

Space for writing the answer to the word problem.

In this rectangle,  $\frac{1}{3}$  is shaded purple  
 $\frac{2}{5}$  is shaded green.



What fraction of the rectangle is not shaded?

Space for writing the answer to the fraction problem.

a	b
1	19
2	23
3	27
4	31

Here is a pattern of number pairs  
 Complete the **rule** for the number pattern

$$b = \square \times a + \square$$