



19th August

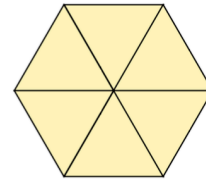
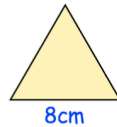
Simplify $\frac{750}{1250}$

A 20x10 grid with a white rectangular box at the bottom center for the answer.

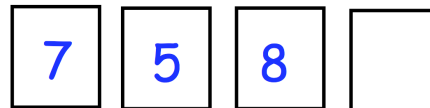
$20 \times 30 \times 40 \times 3$

A 20x10 grid with a white rectangular box at the bottom center for the answer.

Shown is an equilateral triangle with side length of 8cm.
Six of the triangles are put together to make a larger shape.
Find the perimeter of the larger shape.



Shown are four number cards.
The mean of the cards is 10.
Work out the missing number.



Tomas had some money
He spent £1.75 on a coffee.
He spent £2.55 on a muffin.
He has **five-sixths** of his money left.
How much money did Tomas have to **start with**?