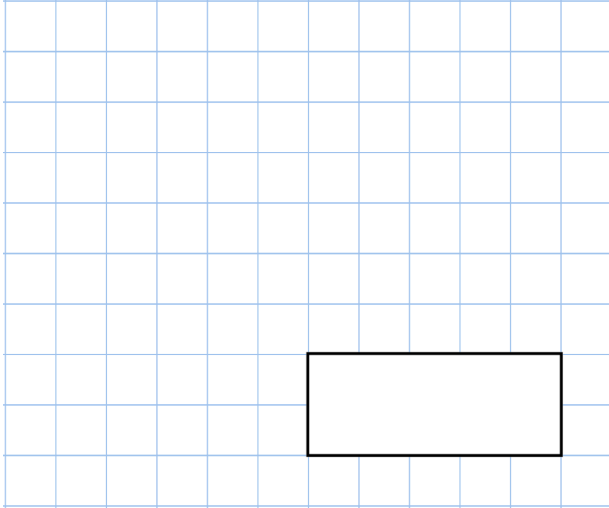


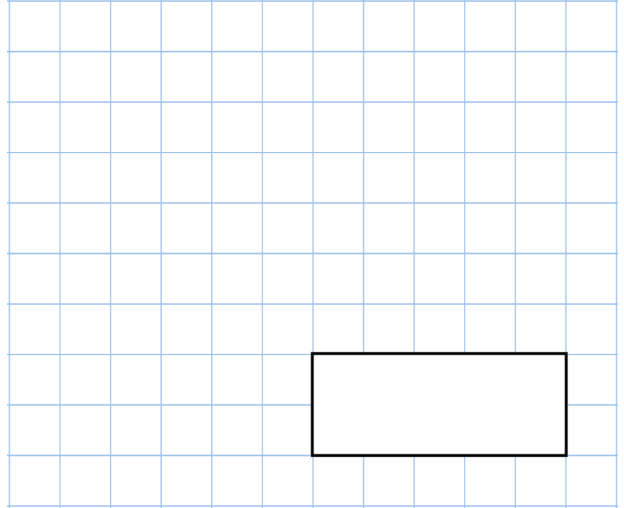


20th August

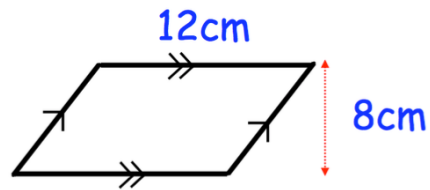
$$-40 - 30$$



$$0.9 \times 3,000$$



Find the area of the parallelogram



Raspberries cost £13.30 per kg
 Mangos cost £6.20 per kg
 4 pineapples cost £5

Work out the cost of 10kg of raspberries,
 7kg of mangos and 2 pineapples.

Molly thinks of a number.

She adds half of the number to
 a third of the number.

Her answer is 100.

What was the number Molly first thought
 of?

