

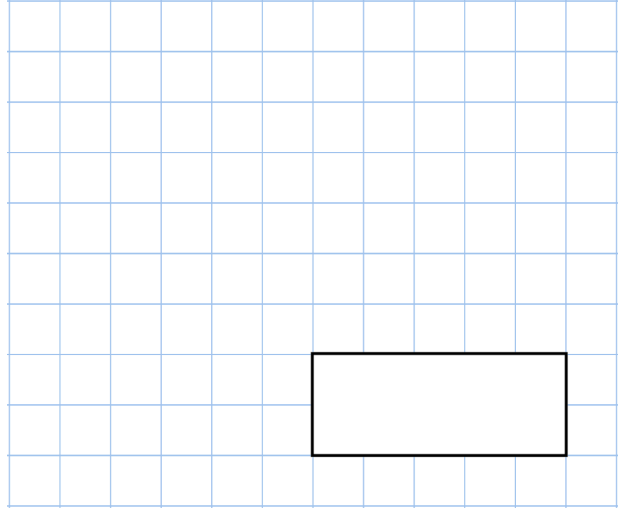


22nd August

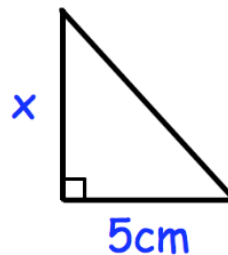
$$11^3$$



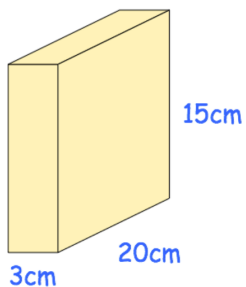
$$\frac{\square}{400} = 0.5$$



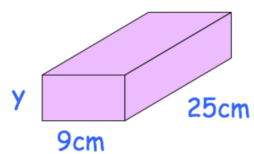
$$5a + 15 = 75$$

Work out the value of **a**The area of the triangle is 15cm^2 Find the height of the triangle, **x**

Cuboid A



Cuboid B



Cuboid A and cuboid B have the same volume.

Find the height of cuboid B, **y**