

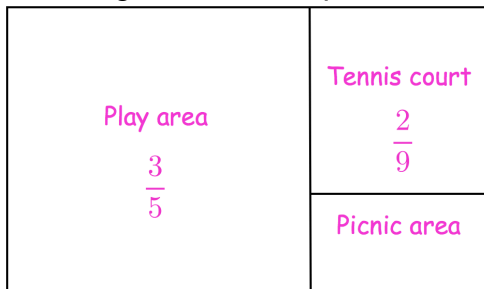


11th December

$$140 - 25 \times 5$$

$$0.55 = \frac{\square}{\square}$$

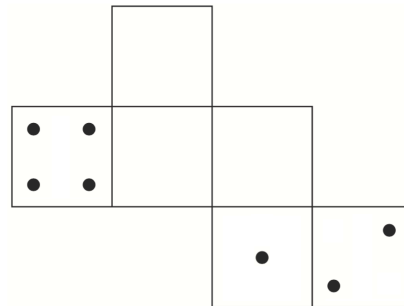

This diagram shows a park



Work out the fraction of the park that is the picnic area.

On a dice, the opposite faces always have a sum of 7.

Draw dots on the three empty faces of the net so that it could fold up to make a dice.



Simplify

$$6a + 7b - 2a + 3b$$