


**3rd January**

35% of 340

$$\frac{1}{2} + \frac{1}{10} + \frac{1}{3}$$

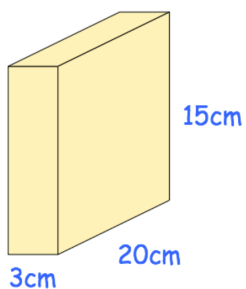
Draw the radius on this circle



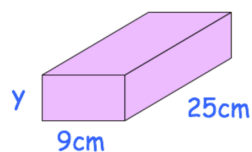
$$22,176 \div 84 = 264$$

Explain how this fact can be used to answer 84×264

Cuboid A



Cuboid B



Cuboid A and cuboid B have the same volume.

Find the height of cuboid B, y