



27th July

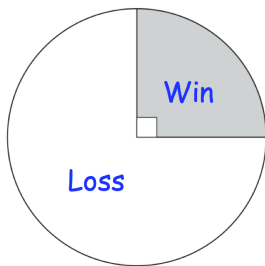
$$-9 + 205$$

$$712 \times 49$$

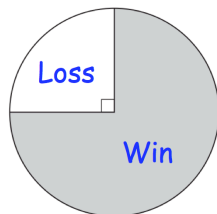
Hannah and Rory play tennis for their school.

The pie charts show information about their results

James says that Hannah has won more matches than Rory.



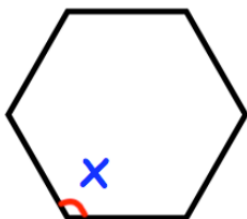
Hannah



Rory

Explain how James might be correct

Shown is a regular hexagon



Find the size of angle x