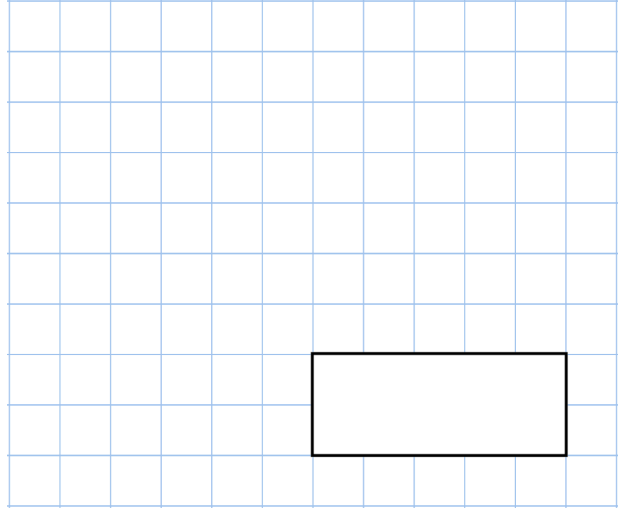
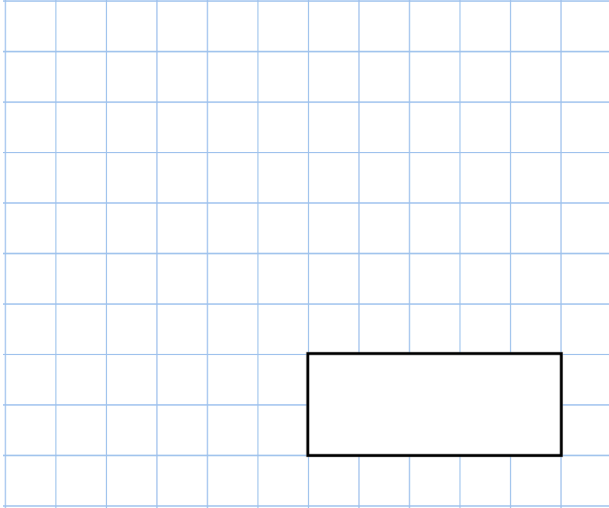




29th July

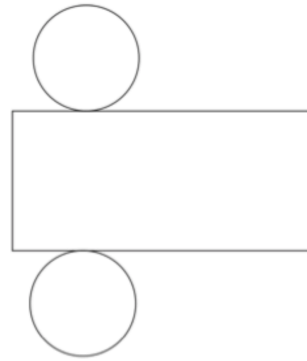
40% of 250

$$\frac{2}{5} \div 2$$



Shown is a net for a 3D shape

Which 3D shape?



The time taken for 4 children to complete a puzzle are:

14 minutes 3000 seconds

half an hour 25 minutes

Work out the mean time taken

Write these numbers in order of size
Starting with the smallest

0.13 $\frac{3}{20}$ 12% $\frac{1}{10}$ 0.09