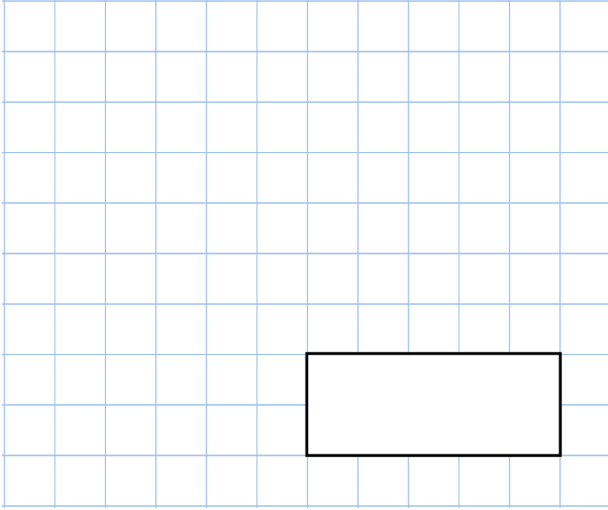


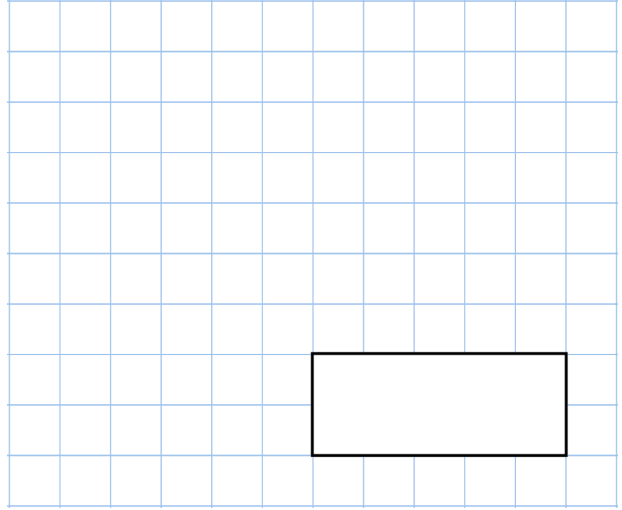


6th June

$$\frac{6}{7} \div 3$$

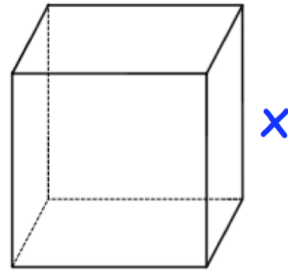


$$62.5\% = \frac{\square}{\square}$$



A cube has a volume of 64cm^3

Find x



Michaela thinks of a number.

She **multiplies the number by 4** and then **subtracts 72** from the result.

Her answer equals the number she started with.

What was the number Michaela started with?

$$5,746 \div 17 = 338$$

Explain how you can use this fact to find the answer to 18×338