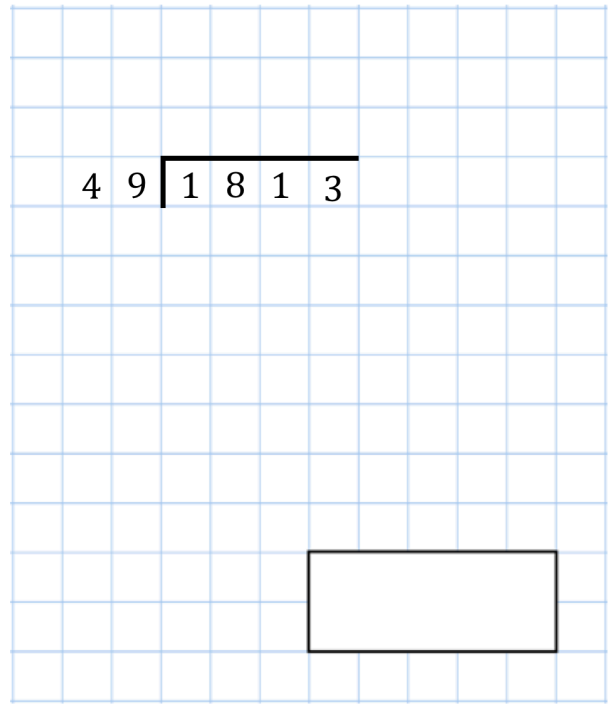
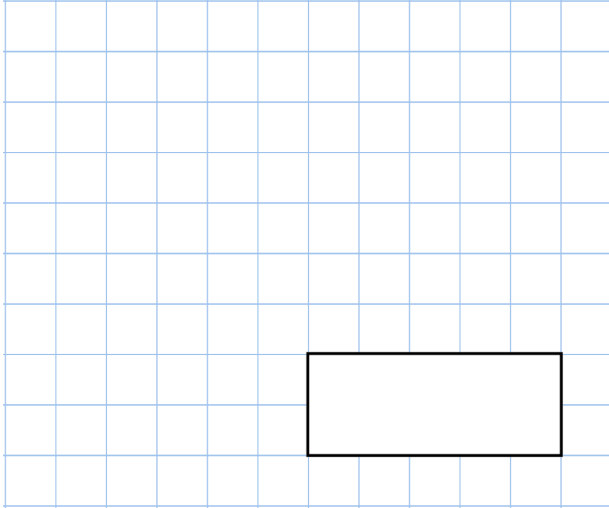





1st March

$$\frac{6}{7} \div 2$$



In this rectangle, $\frac{4}{9}$ is shaded purple
 $\frac{1}{5}$ is shaded green.



What fraction of the rectangle is not shaded?

$$w = 17$$

Work out $6w + 7$

The volume of the cube and the cuboid are equal.
 Find the length of the cuboid.

