

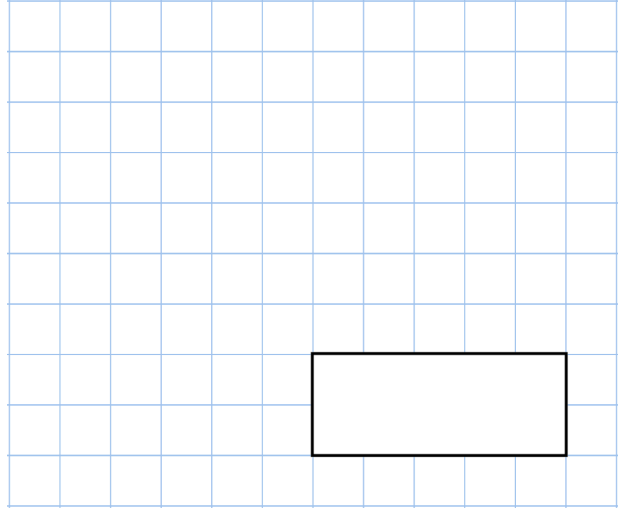


9th May

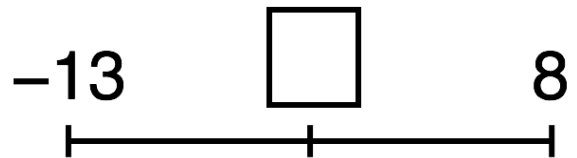
$$19 \times 5.1$$



$$1755 \div 65$$

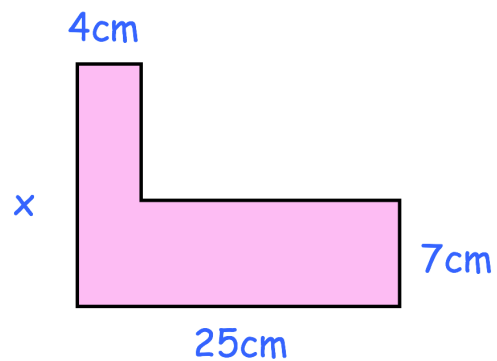


What number is halfway between -13 and 8 ?



The perimeter of this shape is 86cm

Find x



Here are 4 expressions.

$$gh \quad g + h \quad g - h \quad g^2 + h^2$$

If $g = 10$ and $h = 2$ arrange the expressions in order, smallest to largest.