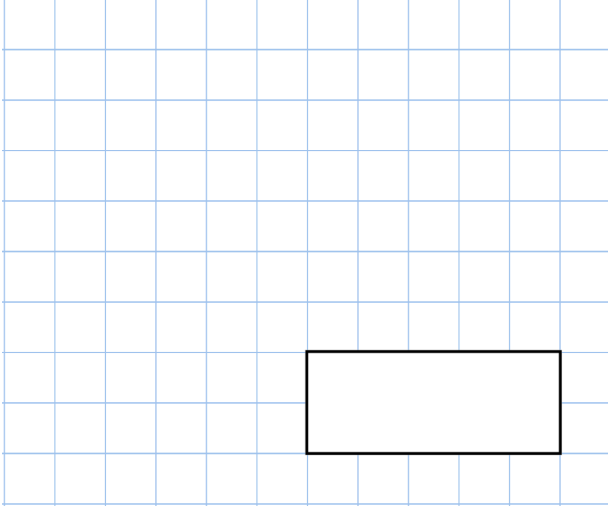


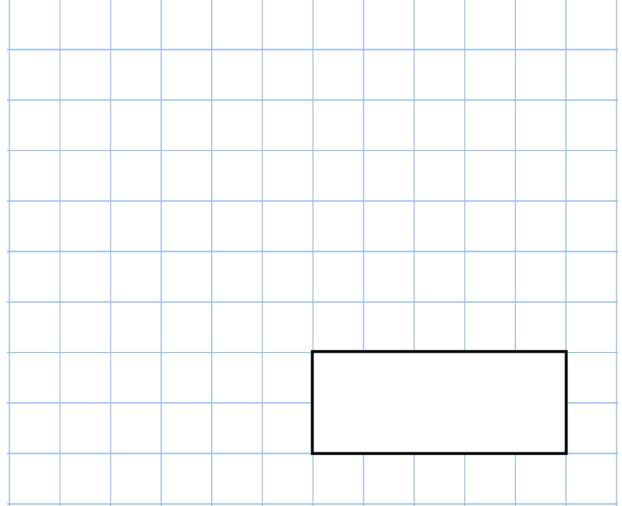


18th November

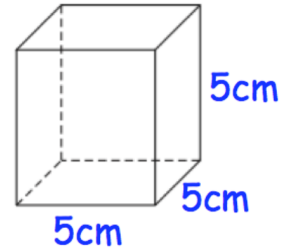
$$0.34 \times 62$$



$$85\% \text{ of } 240$$



Work out the volume of the cube.



Work out the value of u

$$4u - 5 = 27$$

Katie has a pet dog, Maxi.

Maxi eats **two-thirds** of a can of dog food each day.

How many cans of dog food should Katie buy to last three weeks?

