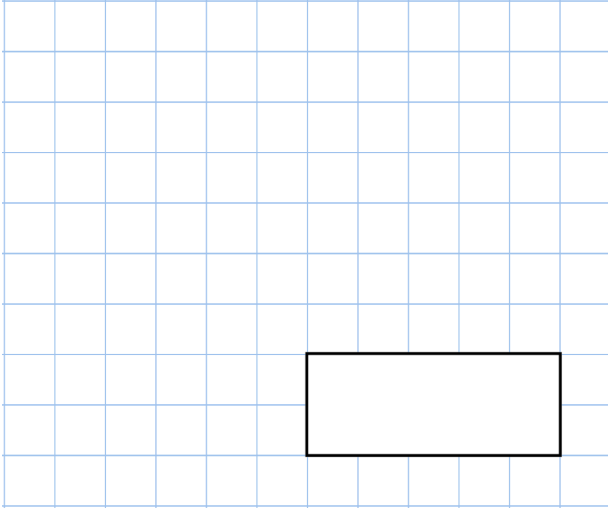


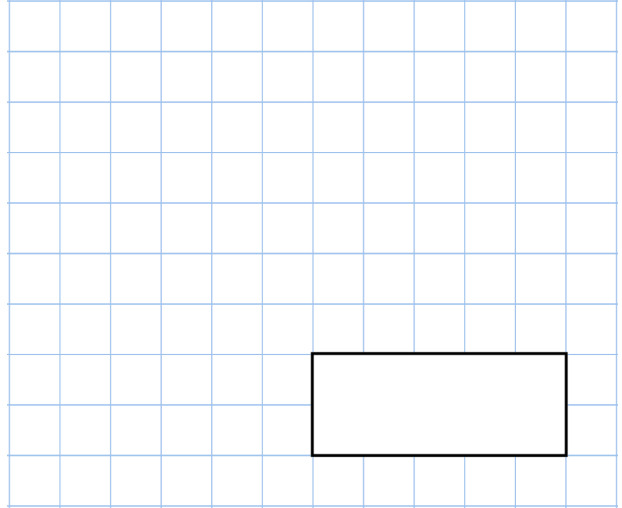


7th November

$5\% \times 1,600$



$0.6 \times 210$



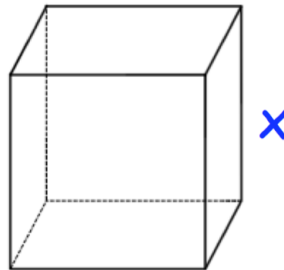
Here is an equation

$$m = 120 - 3c$$

Find the value of **c** when **m** = 90

A cube has a volume of  $125\text{cm}^3$

Find x



Farmer Smith has 50 more sheep than Farmer Jones.  
Farmer White has three times as many sheep as Farmer Jones.

In total there are 1,050 sheep.

How many sheep does Farmer Jones have?

