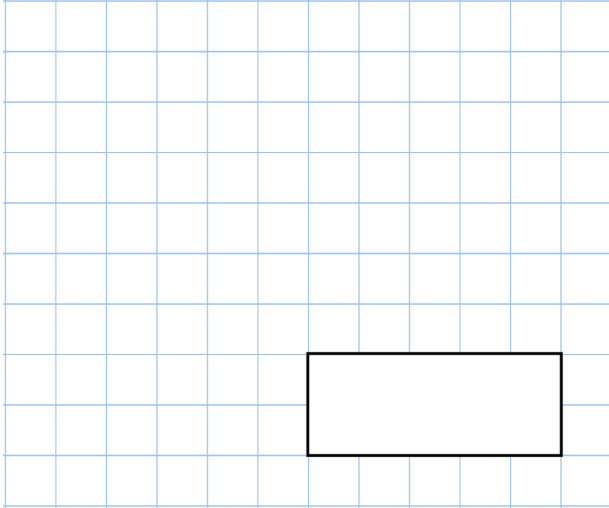
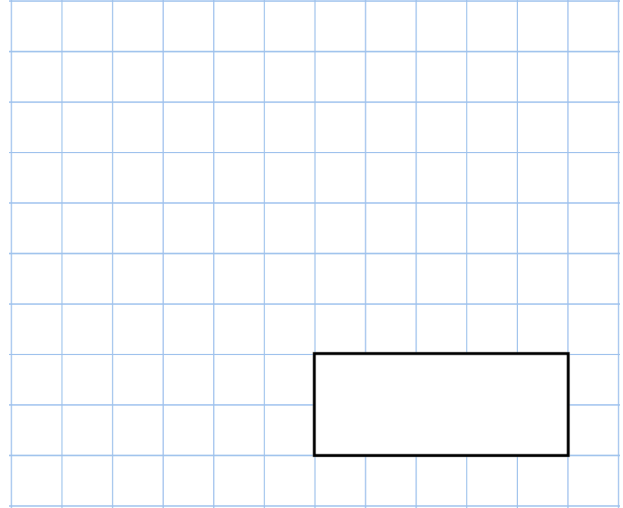



**22nd September**

$$807 \times 119$$



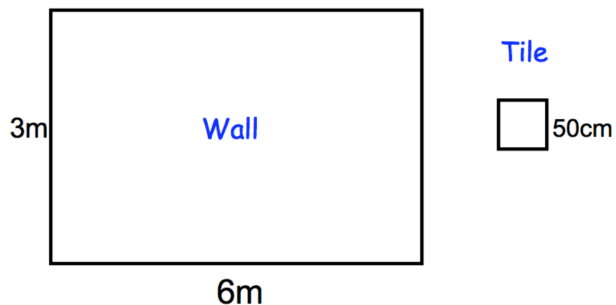
$$75 \times 24 = \square^2 + 900$$



Round 728.35648 to 2 decimal places

Round 728.35648 to 3 decimal places

Jenson is tiling his bathroom wall.  
 The wall is 6 metres by 3 metres.  
 Each square tile is 50cm by 50cm.  
 Each tile costs £3.50



Calculate the cost of tiling the wall.