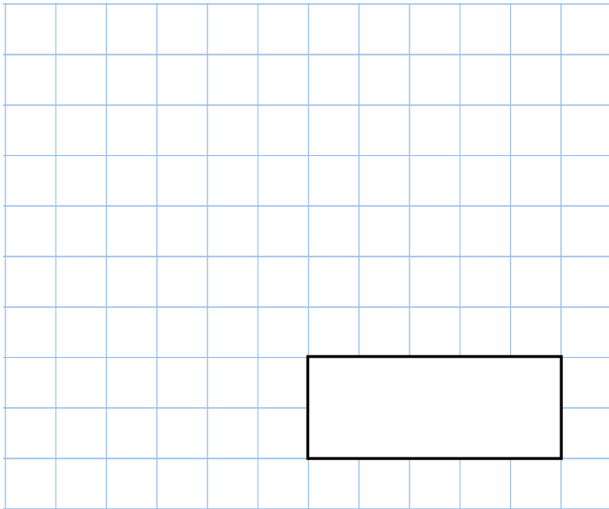


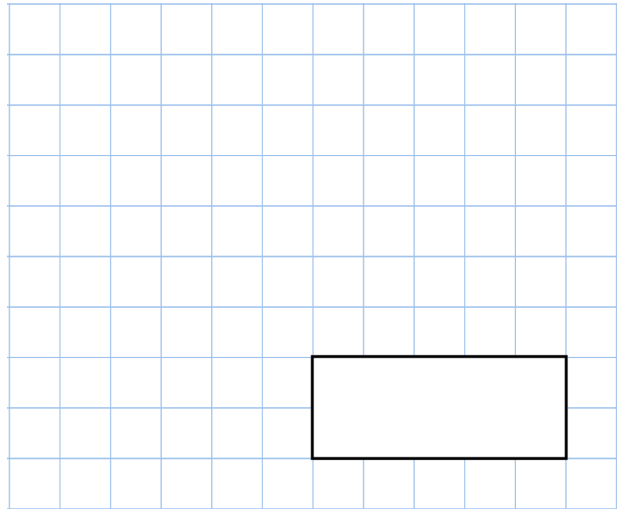


6th April

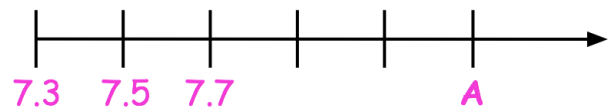
$5.4 + 1.3 + 1.5$



$40 \times 40 \times 10$



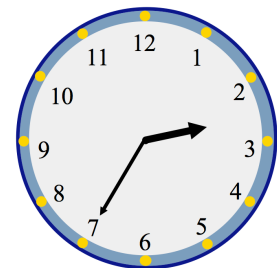
What number is marked at **A**?



It takes Ava 35 minutes to walk home from school.

Ava looks at her watch as she begins walking home.

What time should Ava get home?



At a tournament there are 7 players in a team.

There are 36 teams.

How many players are there altogether?