



29th August

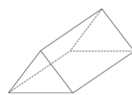
$6,205 - 777$

$18 \times 4 = 6 \times$

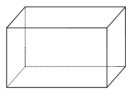
Square-based pyramid



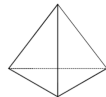
Triangular prism



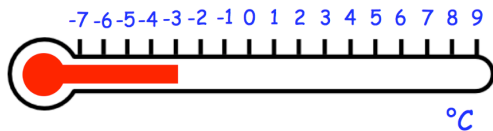
Cuboid



Triangular-based pyramid



Which shape has the least faces?



The thermometer shows the temperature at 4am in a town.

The temperature increase by 7°C by 10am

What is the temperature at 10am?

In 2019 the 15th March is a Friday

What day is the 24th March 2019?