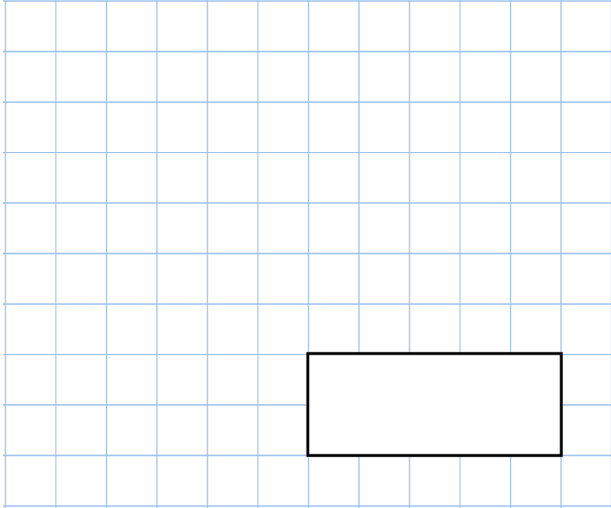
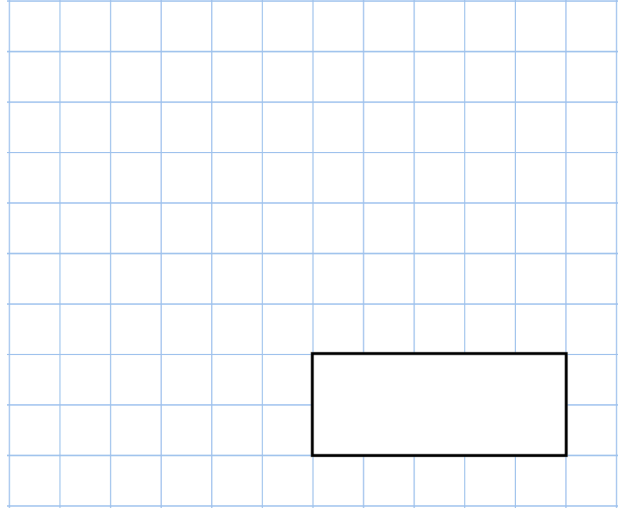


**6th August**

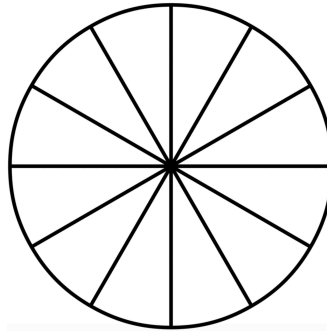
$$705 + 608 + 222$$



$$80 \times 100$$



Shade $\frac{3}{4}$ of the circle




At the start of the week, a greengrocer had 2,968 apples.

During the week,

- 1,009 more apples were delivered
- 2,771 apples were sold

How many apples were left at the end of the week?



A stack of 10 identical boxes is 150cm tall

Jake removes 7 boxes.

How tall is the stack now?

