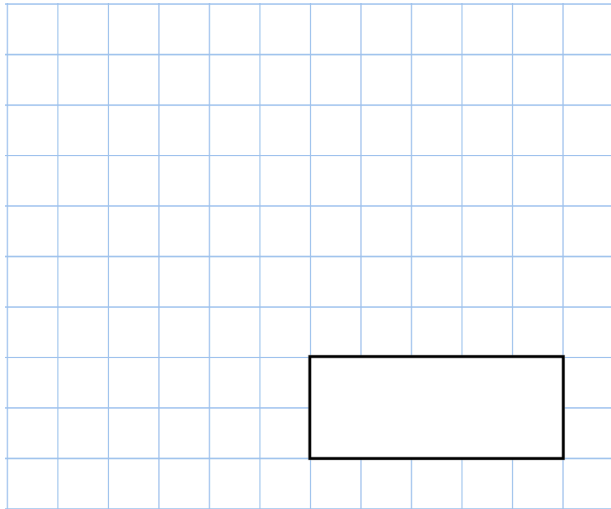


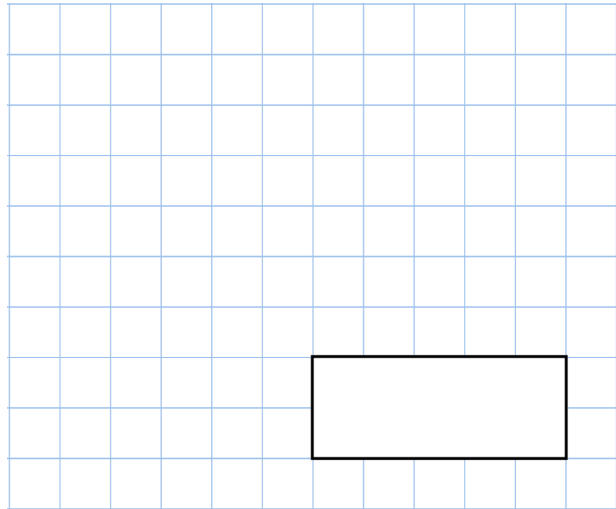


21st December

$55 \times 100$



$888 + 909$

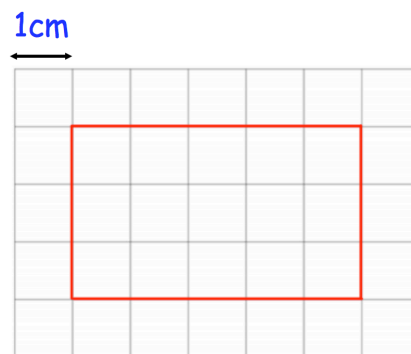


Complete the table

Fraction	Decimal	Percentage
$\frac{1}{2}$	0.5	
	0.75	75%
$\frac{1}{4}$		25%

The rectangle is drawn on centimeter-squared paper.

Find the area of the rectangle



This shape has one acute angle

Tick the acute angle

