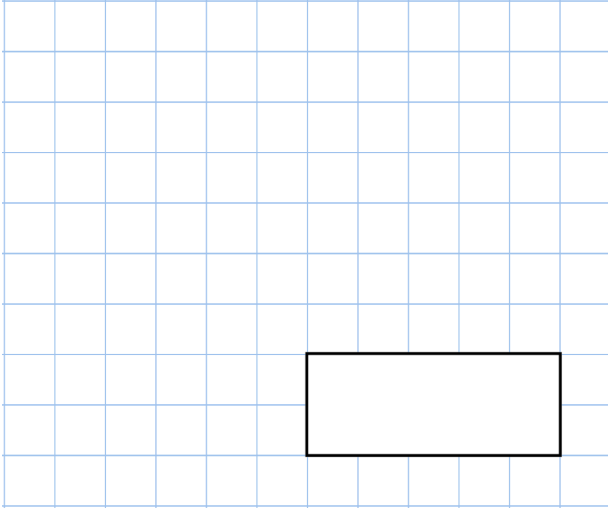
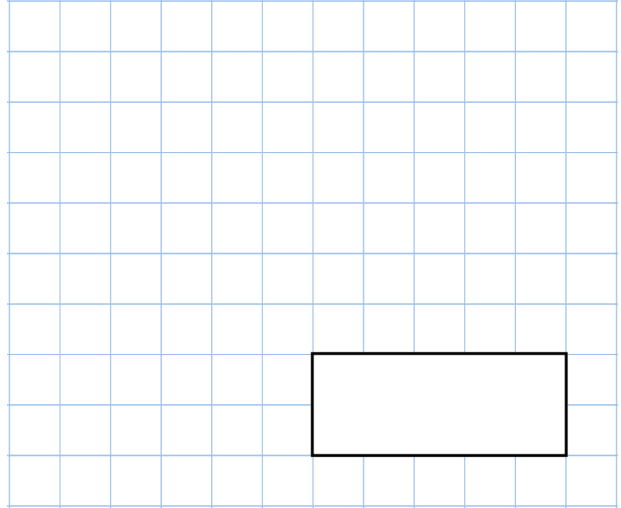


**26th December**

7×12



$\frac{4}{5} - \frac{1}{5}$



A bookshelf in a classroom is 116cm long.


A teacher has 30 maths books, each 4cm wide.

What is the maximum number of textbooks that will fit on the shelf?



A square has a perimeter of 44cm

Find the length of one side.



Simon buys 3 drinks.
He pays with a £5 note.
This is his change.



Work out the cost of 1 drink.