

Name: _____

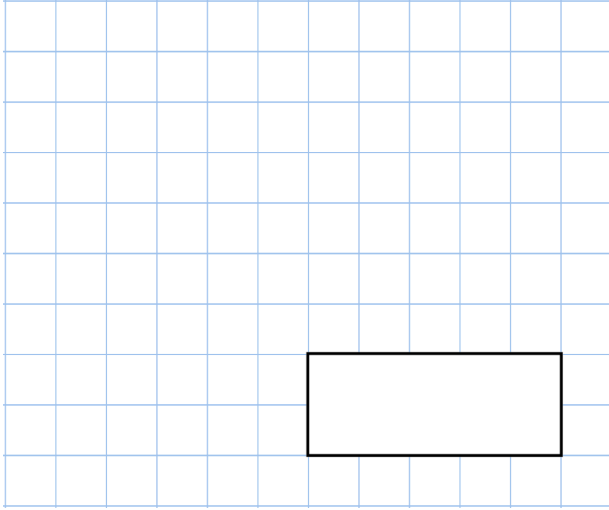
5-a-day

Silver

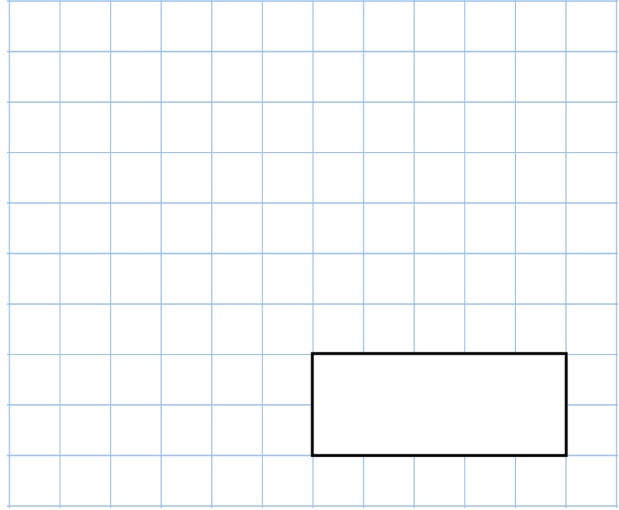


26th February

$$6 \times 5 \times 15$$




$$4.7 + 6.8$$



Round 671 to the nearest hundred

Round 3189 to the nearest thousand

A tin has 120 cookies inside.
8 children each take 6 cookies.
How many cookies are left in the tin?



What is 135 minutes in hours and minutes?

hours minutes