

Name: \_\_\_\_\_

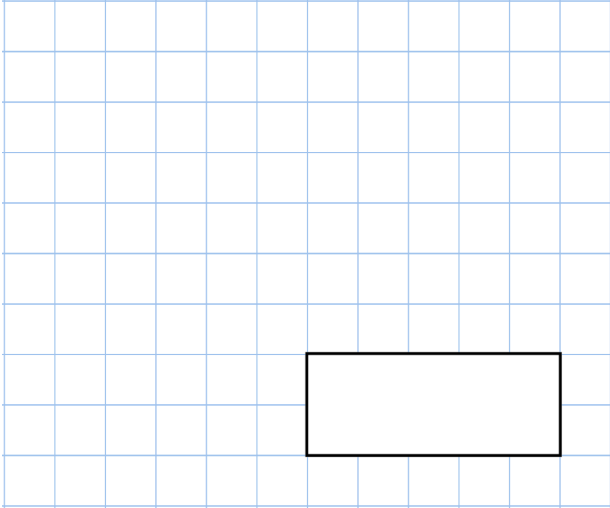
5-a-day

Silver

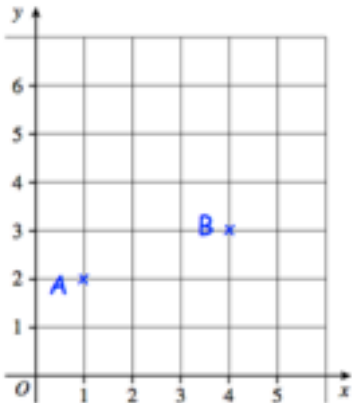
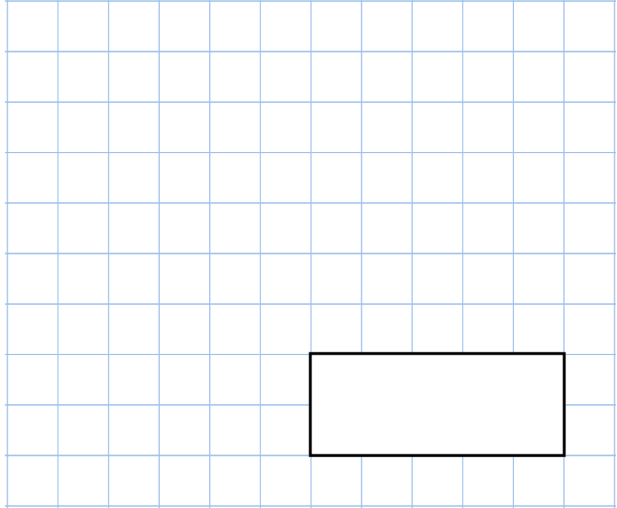


9th February

$$1 \times 2 \times 3 \times 4 \times 5 \times 6$$



$$4,000 \div 100$$



Write down the coordinates of the point A

ABC is a right-angle triangle.

Write down what the coordinates of point C could be.

The temperature in Derby is  $4^{\circ}\text{C}$ .

The temperature in Glasgow is  $6^{\circ}\text{C}$  colder.

What is the temperature in Glasgow?