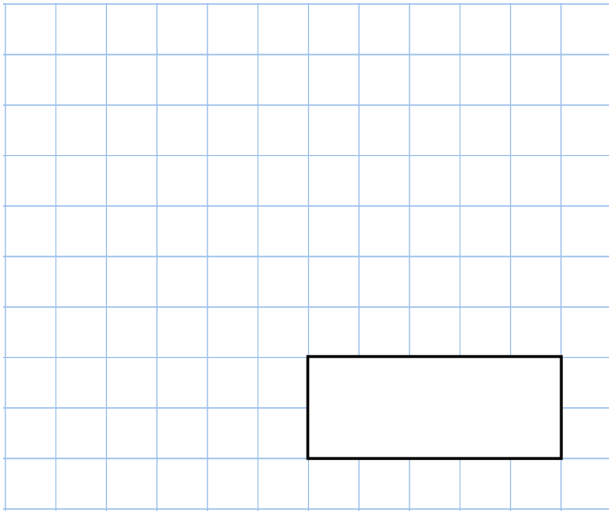


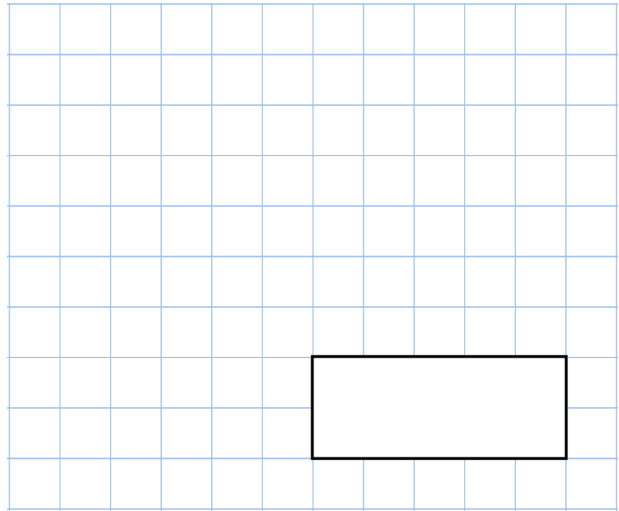


2nd January

$425 - 170$



$8 \times 44$

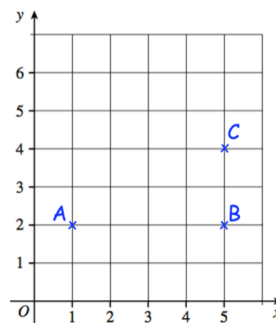


Arrange these numbers in order, starting with the largest

15,123    15,200    15,032    15,103

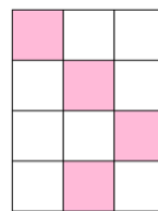
Three points are shown on a grid. ABCD is a rectangle.

Write down the coordinates of the point D



Two of the shapes have been shaded so that  $\frac{1}{3}$  of the shape is pink.


Which shape has **not** been shaded  $\frac{1}{3}$  pink?



Shape A



Shape B



Shape C