

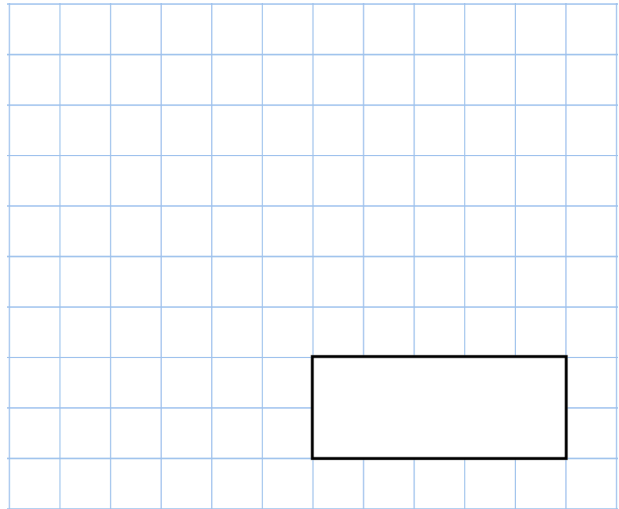


7th January

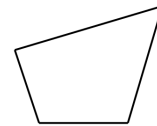
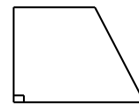
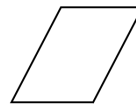
$$123 \times 4$$



$$\frac{1}{4} + \frac{1}{4} + \frac{1}{4}$$




Circle the **quadrilateral** with exactly three acute angles



In a shop, 3 apples cost the same as 2 bananas

One banana costs 57p

How much does **one** apple cost?



Circle the number that is **10 times** greater than eight hundred and forty.

8,040 84 8,004 8,400 840