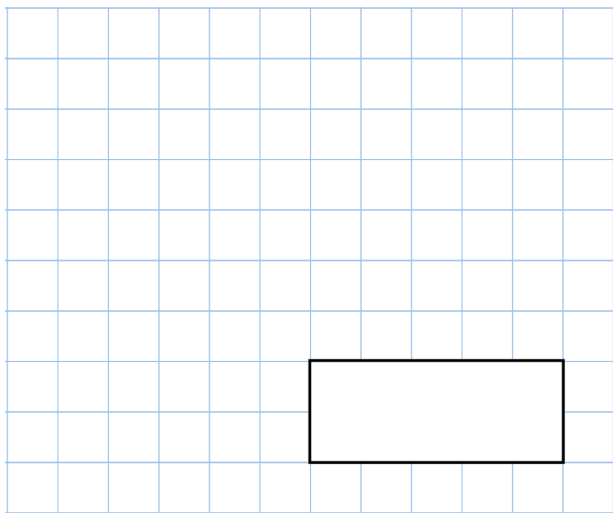


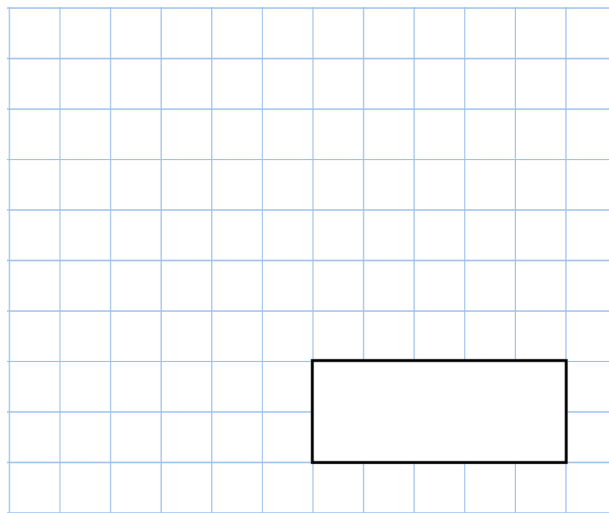


6th June

$$56.4 + 23.7$$

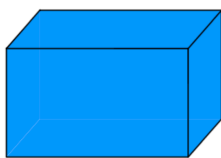


$$8,073 - 605$$



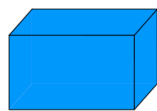
Mia buys 3 large packets of card and 2 small packets of card.

Large



120 sheets of card

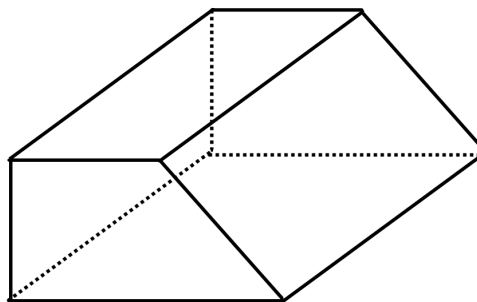
Small



70 sheets of card

How many sheets of card did Mia buy altogether?

How many edges does this 3-D shape have?



Write the correct sign =, < or > in each circle

$$12 \times 11 \bigcirc 10 \times 14$$

$$120 \div 30 \bigcirc 8 \div 2$$

$$9 \times 50 \bigcirc 100 \times 4$$