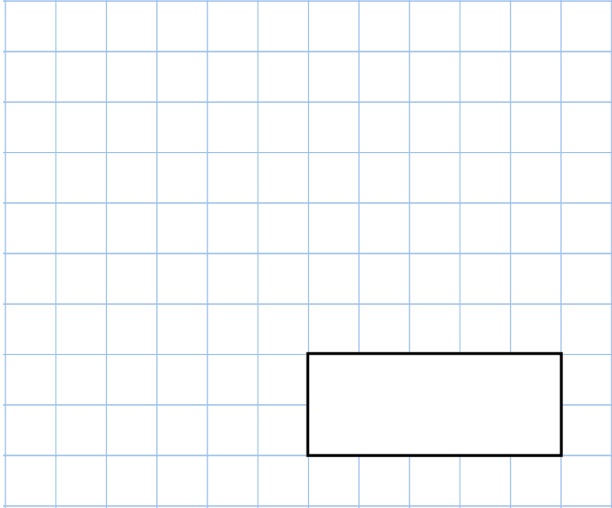


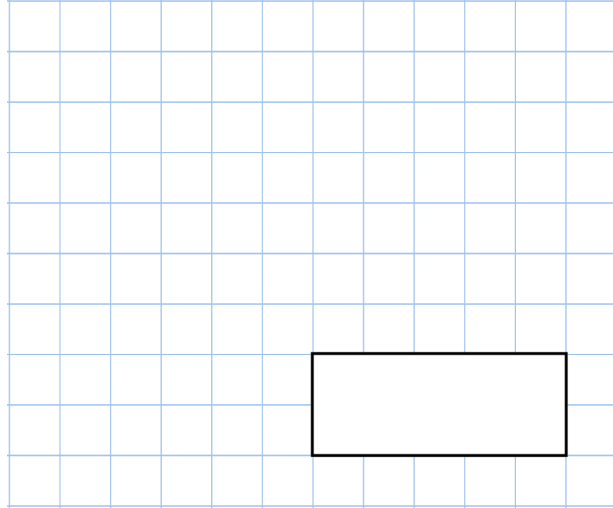


24th March

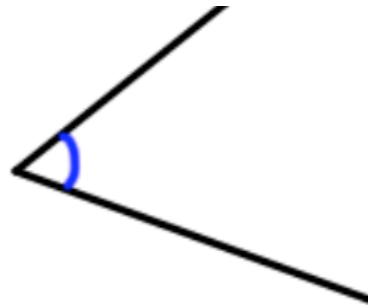
$$5 \times 6 \times 7 \times 2$$



$$\frac{7}{9} - \frac{5}{9}$$



What type of angle is shown?



Shane looks at his watch



Circle the most likely thing that Shane is doing

Eating his breakfast

Eating his lunch

Eating his dinner

Nigel is drawing a **kite** on the grid.

Finish drawing the **kite** on the grid.

