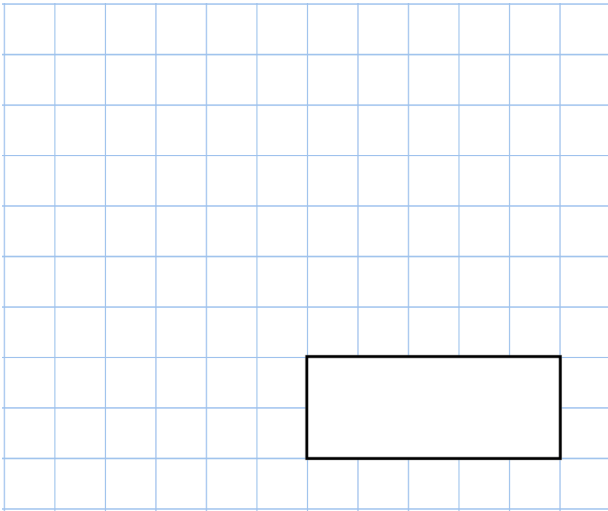
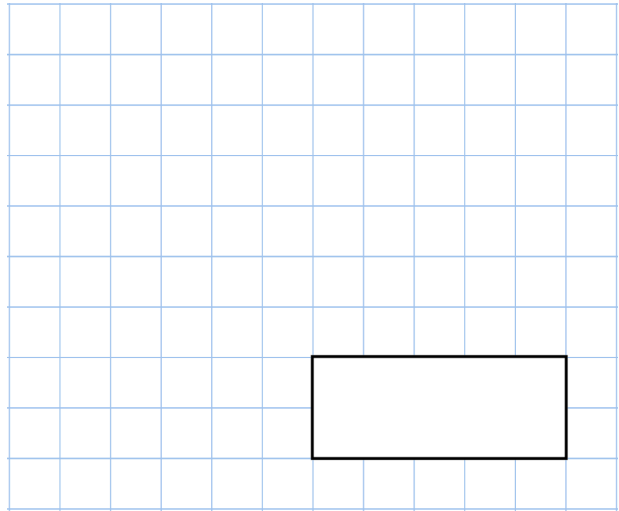



28th March

$$187 + 408 + 620$$




$$16 \times 3 = 4 \times$$



Circle the angle that is obtuse

 35° 56° 88° 91°

What percentage of the shape is shaded?



Kayleigh has 50 pence, 20 pence and 10 pence pieces.

She has 12 of each type of coin.

How much money does she have in total?

