

Name: \_\_\_\_\_

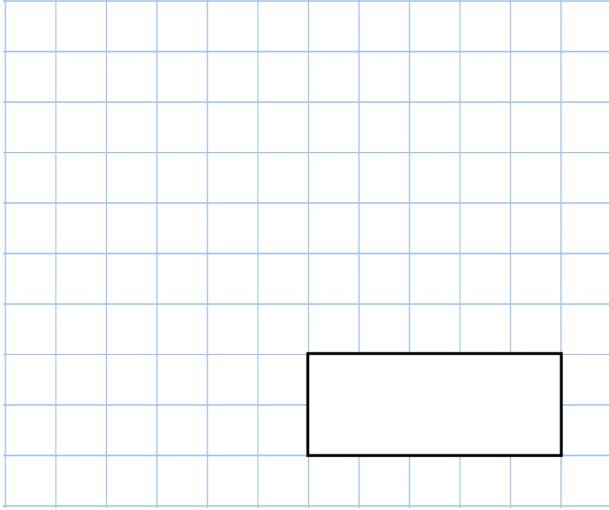
5-a-day

Silver

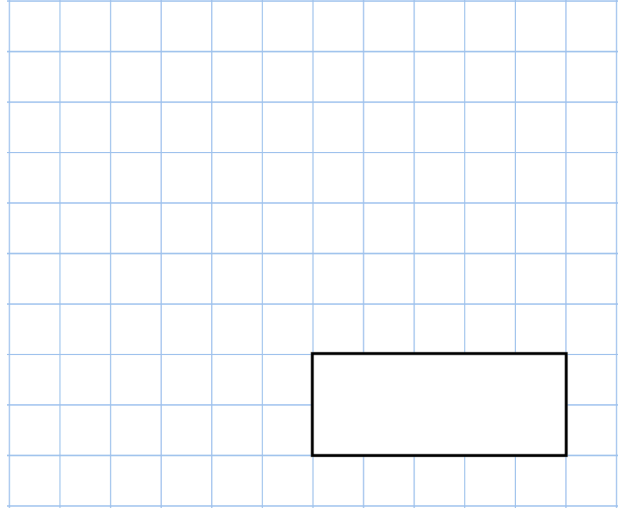


10th November

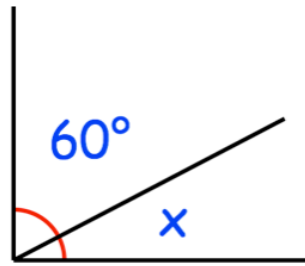
$51 \times 7$



$20 \times 70 \times 10$



Calculate the size of angle x



In a town in Cornwall, it rained for 13 days during April.

What fraction of the days in the month did it rain?

There are 6,000 Lego bricks in a box. Vicky and Conor take 900 bricks each. Mollie, Tim and Roger share the rest of the bricks equally.

How many lego bricks does Mollie get?

