

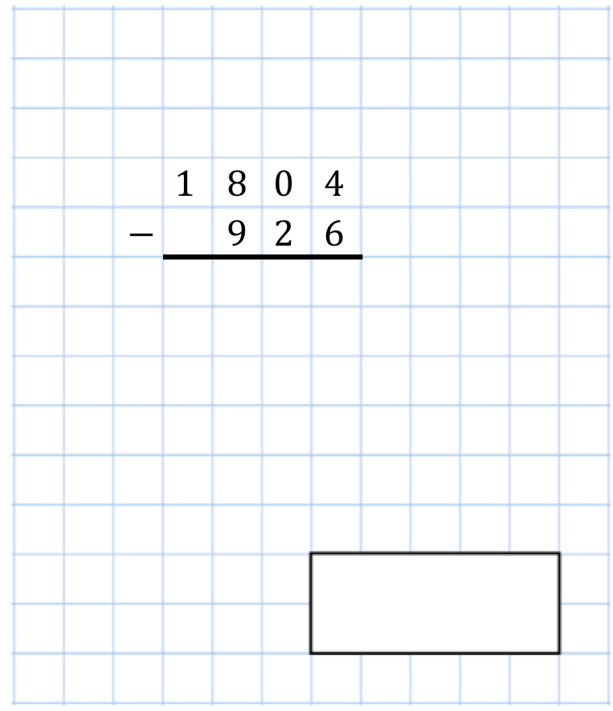


20th November

$$12 \times 11$$



$$\begin{array}{r} 1804 \\ - 926 \\ \hline \end{array}$$



I think of a number.

I double my number and then I add 3.

The answer is 41

What was my number?

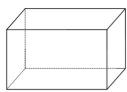
Square-based pyramid



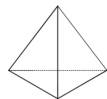
Triangular prism



Cuboid



Triangular-based pyramid



Which shape has the most edges?

Kali is doing sit-ups

She does 8 sit-ups every thirty seconds.

How many sit-ups does she do in two minutes?