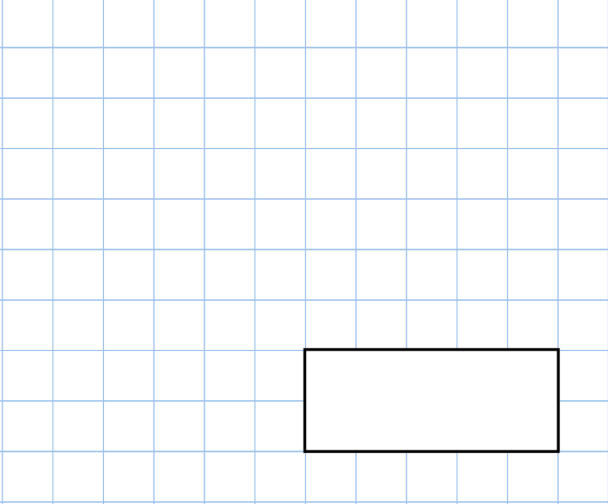
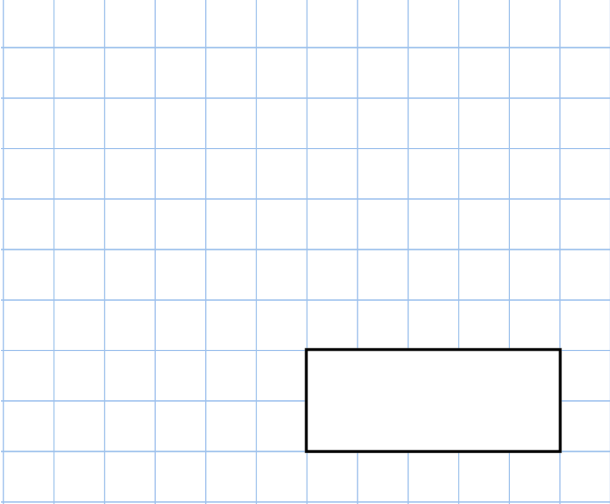
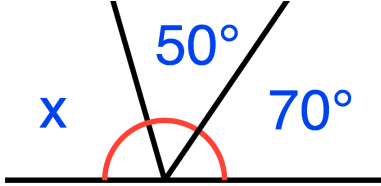

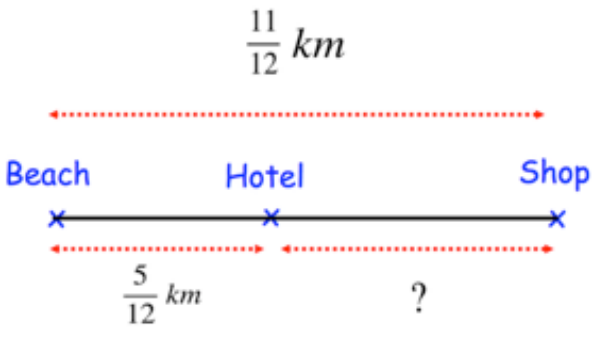




| | |
|--|---|
| <p>30th November</p> | |
| <p>17×5</p>  | <p>$1,800 \div 6$</p>  |
| <p>Find the size of angle x</p> |  |
| <p>Lucy cuts 5 metres of rope into three pieces.</p> <p>The first piece is 0.9 metres.</p> <p>The second piece is 1.8 metres.</p> <p>Work out the length of the third piece of rope.</p> |  |
|  | <p>What is the distance from the hotel to the shop?</p> |