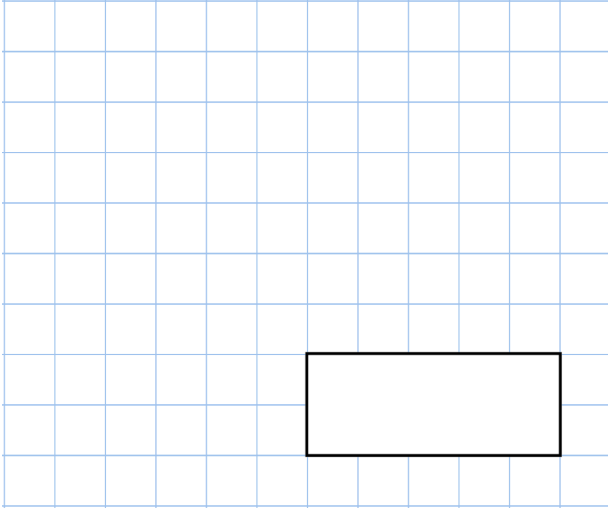


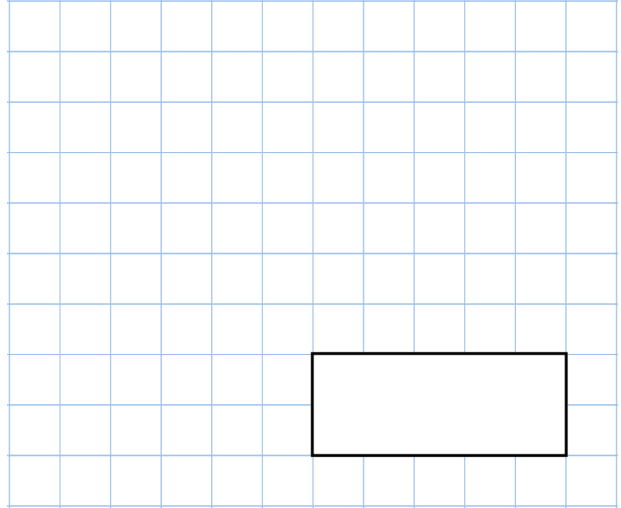


31st October

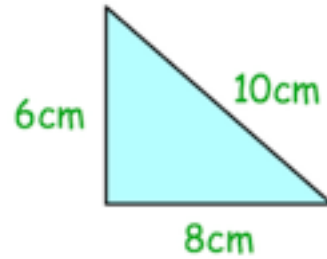
$$\frac{1}{4} + \frac{1}{4} + \frac{1}{4}$$



$$28 \times 5$$



Work out the perimeter of this triangle.



Here is part of a number sequence

... 350 400 450 500 ...

Circle all the numbers below that would appear in the sequence

555 620 650 800

What type of triangle is shown?

