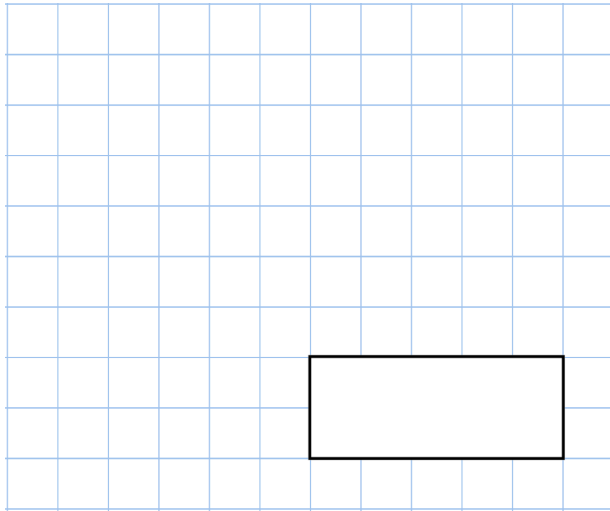


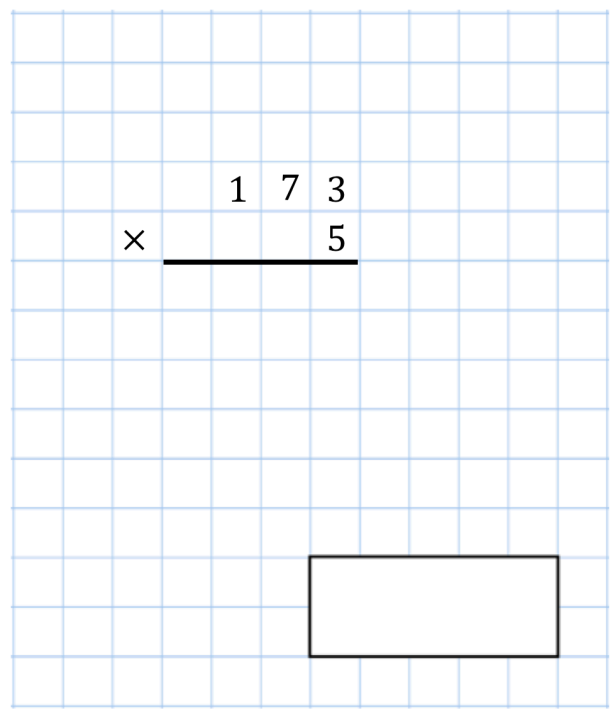


5th October

$$305 + 826 + 185$$



$$\begin{array}{r} 173 \\ \times \quad 5 \\ \hline \end{array}$$



A teacher has 135 sweets.

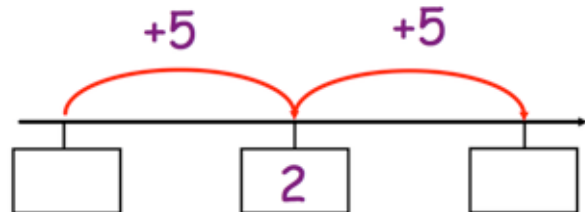
She shares the sweets equally between 5 children.

How many sweets does each child receive?



Here is part of a number line.

Write the missing numbers in the boxes.



Write the three missing numbers

$$\begin{array}{r} 4 \quad \square \quad 7 \\ + \square \quad 5 \quad \square \\ \hline 6 \quad 8 \quad 2 \end{array}$$