

Name: Answer

5-a-day

Bronze



15th December

6×0

0

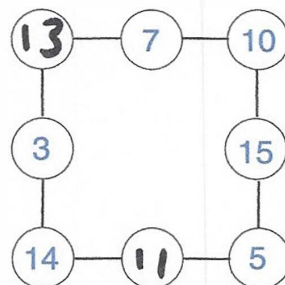
$55 + 30 = 100 - \boxed{15}$

35

15


In the diagram, three circles in a straight line **add to 30**.

Write in the missing numbers.

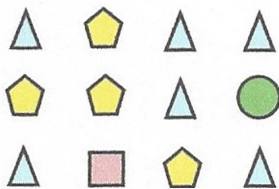


Write down the mass of the apple

73g



Complete the tally chart



Shape	Tally
Circle	
Pentagon	
Square	
Triangle	