

Name: _____

5-a-day

Bronze







1st January

$50 + 1000$

1050

$18 \div 1$

18

A  £3,000	B  £2,199
C  £3,250	D  £2,800

Put these cars in order of price, starting with the **lowest price**.

2,199 2,800 3,000 3,250
B D A C

There are 110 people on a train.

At the next station, 60 people **get off the train** and 25 people **get on the train**.

How many people are on the train **now**?

75

$$\begin{array}{r} 110 \\ - 60 \\ \hline 50 \end{array} \qquad \begin{array}{r} 50 \\ + 25 \\ \hline 75 \end{array}$$

What number is the arrow pointing to?

