

Name: _____

5-a-day

Bronze



30th March

$62 \div 2$

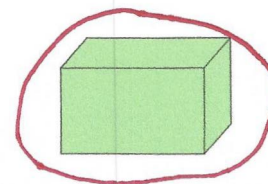

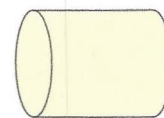
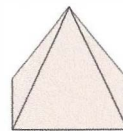
$$\begin{array}{r} 31 \\ 2 \overline{)62} \\ \underline{62} \\ 0 \end{array}$$

31

4×9

36

Circle the shape that has the most faces



Alice collected information about the pets her friends owned.

Here are her results

Pet	Number owned
Dog	6
Cat	9
Rabbit	12

The bar chart shows the information from the table

Fill in **all** the missing labels

