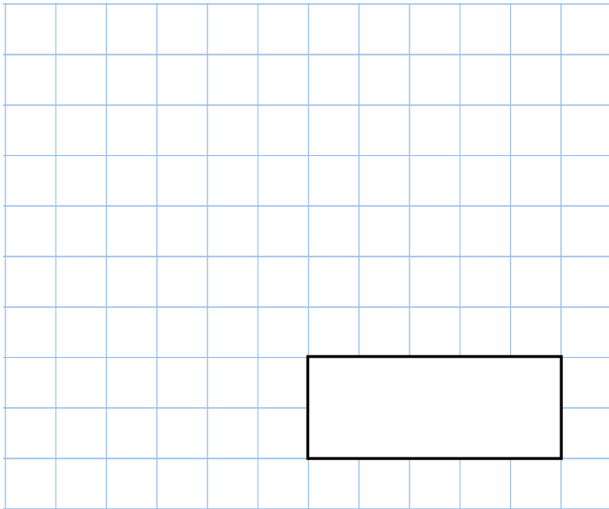


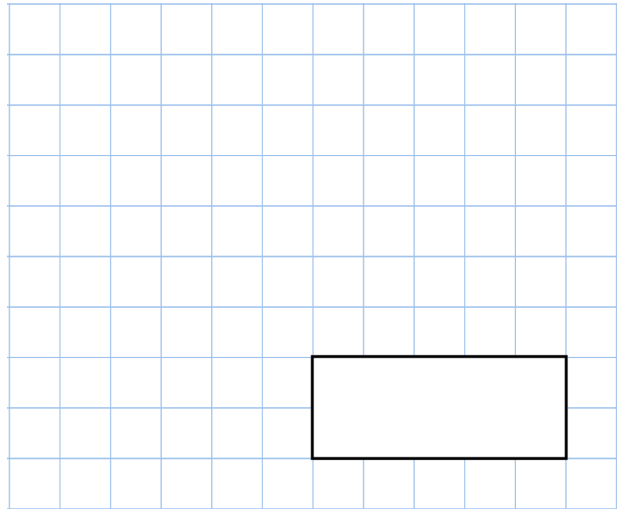


10th June

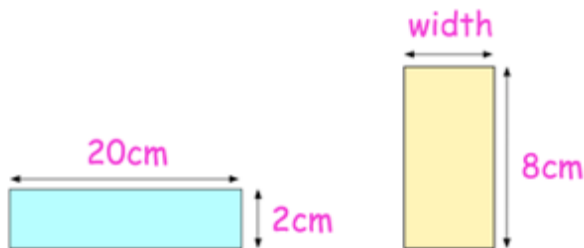
$$\frac{7}{15} - \frac{1}{5}$$



$$10^3 = 1,000$$



A group of 9 friends go on a holiday.
 The total cost of the holiday is £6534
 How much does each person pay?



These two rectangles have the same area
 Work out the width of the yellow rectangle

A box contains red, yellow and blue sweets.
 In total there are 80 sweets.
 20% of the sweets are yellow.
 There are 6 more red sweets than yellow sweets.

What fraction of the sweets are blue?